




ŘEŠENÍ KARET

MATEMATIKA

pro 1. ročník základní školy



pracovní karty



8 594022 781792

Objednací číslo: K005

FRAUS

Informace a objednávky:
Nakladatelství Fraus
Goethova 8, 301 31 Plzeň
tel.: 377 321 069; 377 225 615
fax: 377 224 594
e-mail: info@fraus.cz
www.fraus.cz

Vážení učitelé, vážení rodiče,

těší nás, že jste si vybrali naše pracovní karty, které obsahují množství doplňujícího materiálu k oběma dílům učebnice Matematika pro 1. ročník základní školy – Přemýšlení a počítání, již vydalo Nakladatelství Fraus.















Klíčové myšlenky a celkovou koncepci najdete v Příručce učitele a v uvedených učebnicích autorů prof. RNDr. Milana Hejného, CSc., RNDr. Dariny Jirotkové, Ph. D., a PhDr. Jany Slezákové-Kratochvílové, Ph. D.

Pracovní karty vám doporučujeme používat jako doprovodný materiál, přičemž podrobnější metodické pokyny a některá řešení najdete právě v Příručce učitele. Věříme, že se tento komplet stane zajímavým a účinným nástrojem k budování matematického myšlení vašich žáků, anebo vlastních dětí, případně i vnoučat.







Mnoho úspěchů přejí Jitka Michnová, kolektiv poradců a redakce Nakladatelství Fraus, s. r. o.

1

ZAPIŠ KOLIK

 /	 ///	 //	 ///	 /	 ///	 //
 ///	 ///	 /	 ///	 //	 //	 /






















KOLIK CELKEM?

 /	 //	 ///
 //	 ///	 ///
 ///	 ///	 ////

Copyright: © Nakladatelství Fraus, Pízeň 2007

2

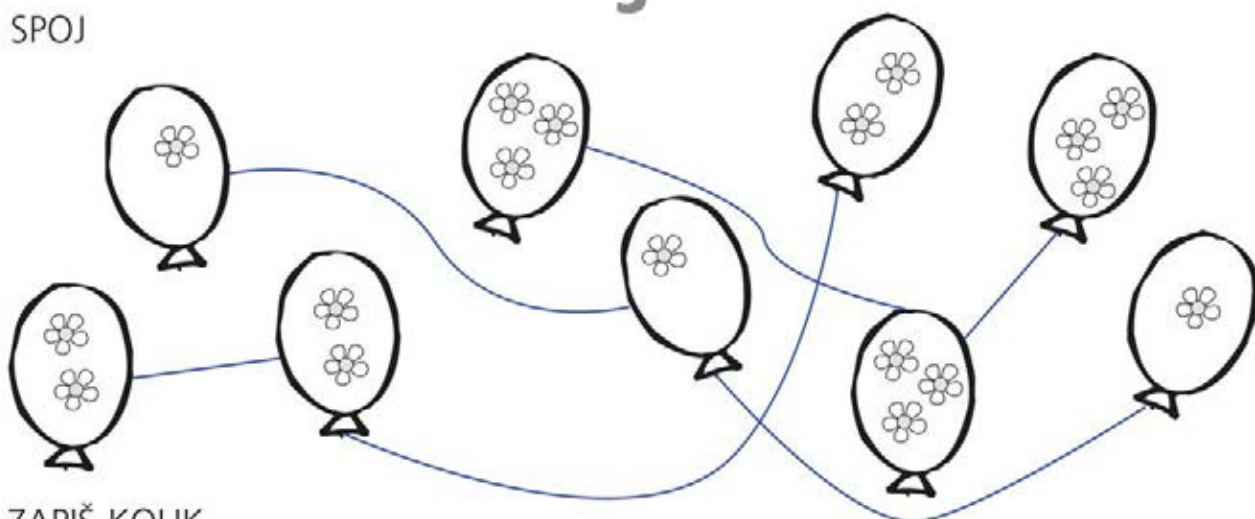
ZAPIŠ KOLIK

 //	 ///	 /	 ///	 ///	 /	 //
 //	 /	 ///	 /	 //	 //	 ///
 /	 ///	 //	 ///	 /	 //	 //

Copyright: © Nakladatelství Fraus, Pízeň 2007

SPOJ

3



ZAPIŠ KOLIK

	///
	/
	//
	/
	///

	/
	///
	//
	/
	///

Copyright: © Nakladatelství Fraus, Pízeň 2007

4

VYBARVI DANÝ POČET

/	//	///	//	///	//	/
///	//	///	/	///	//	///

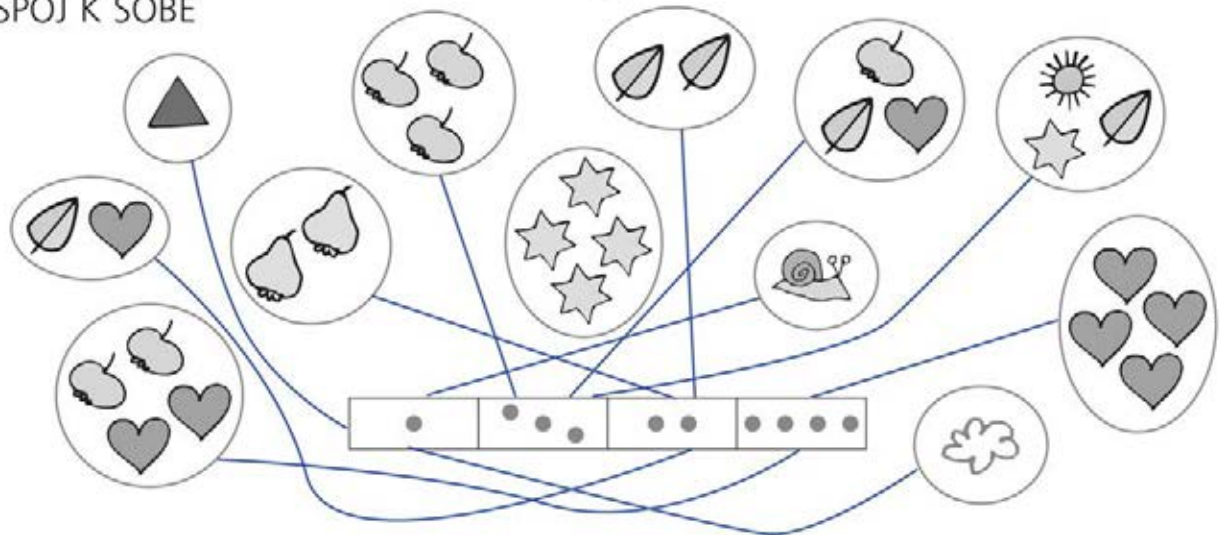
POKRAČUJ A VYBARVI



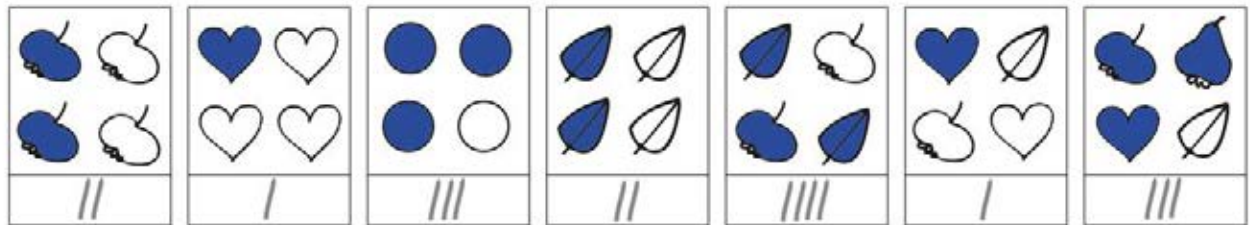
Copyright: © Nakladatelství Fraus, Pízeň 2007

SPOJ K SOBĚ

5



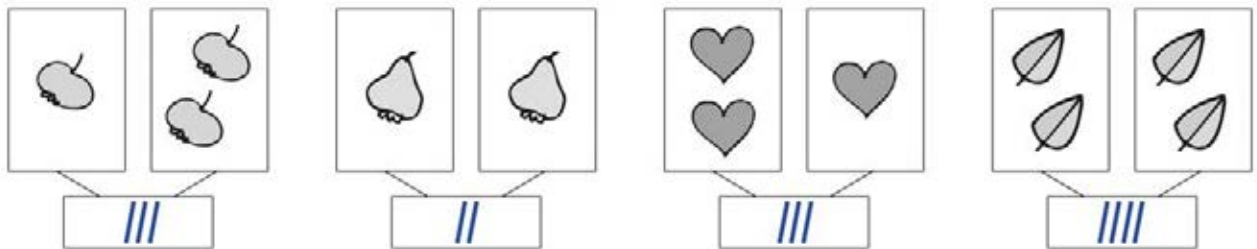
VYBARVI DANÝ POČET



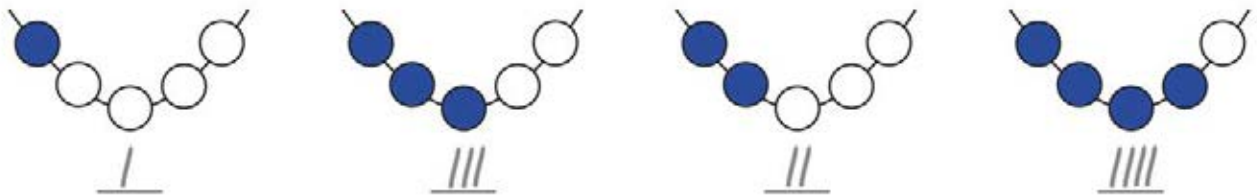
Copyright: © Nakladatelství Fraus, Plzeň 2007

6

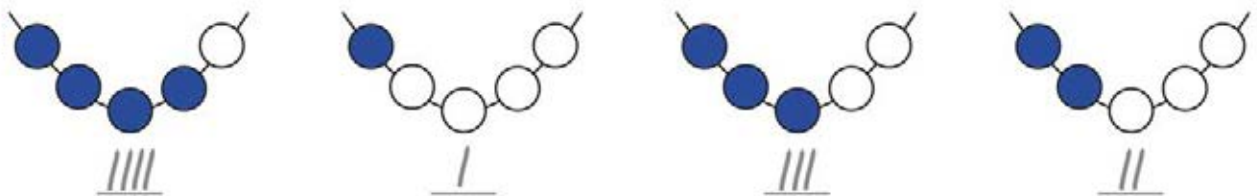
KOLIK DOHROMADY?



VYBARVI DANÝ POČET



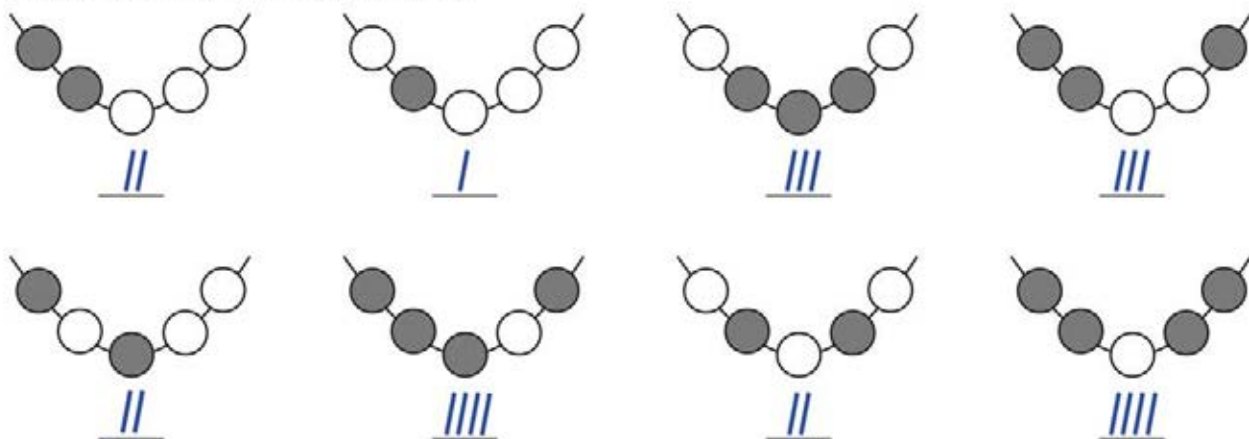
VYBARVI JINAK



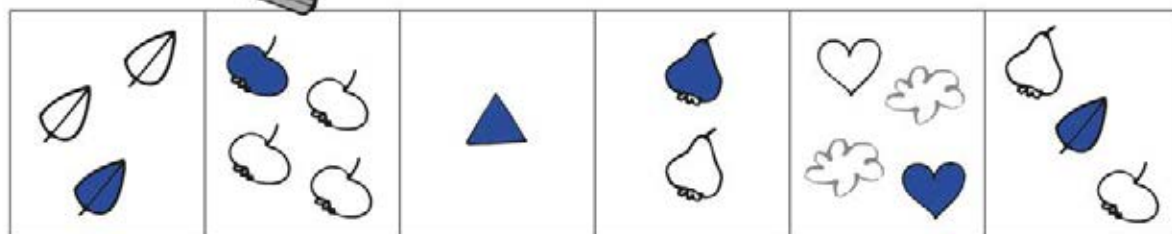
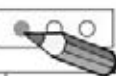
Copyright: © Nakladatelství Fraus, Plzeň 2007

7

ZAPIŠ POČET VYBARVENÝCH



VYBARVI 1



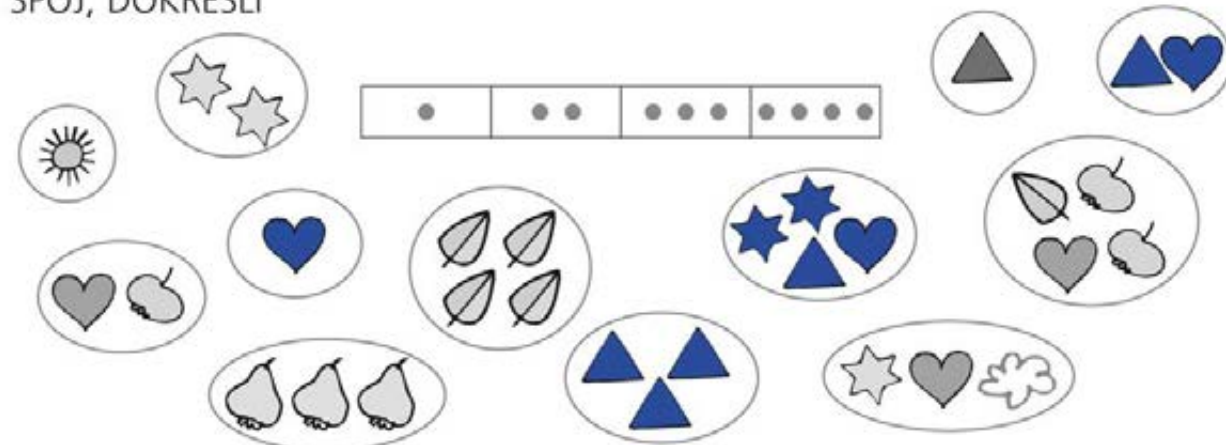
Copyright: © Nakladatelství Fraus, Pízeň 2007

8

POKRAČUJ A VYBARVI



































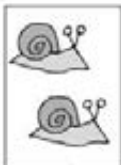









SPOJ, DOKRESLI



Copyright: © Nakladatelství Fraus, Pízeň 2007

9

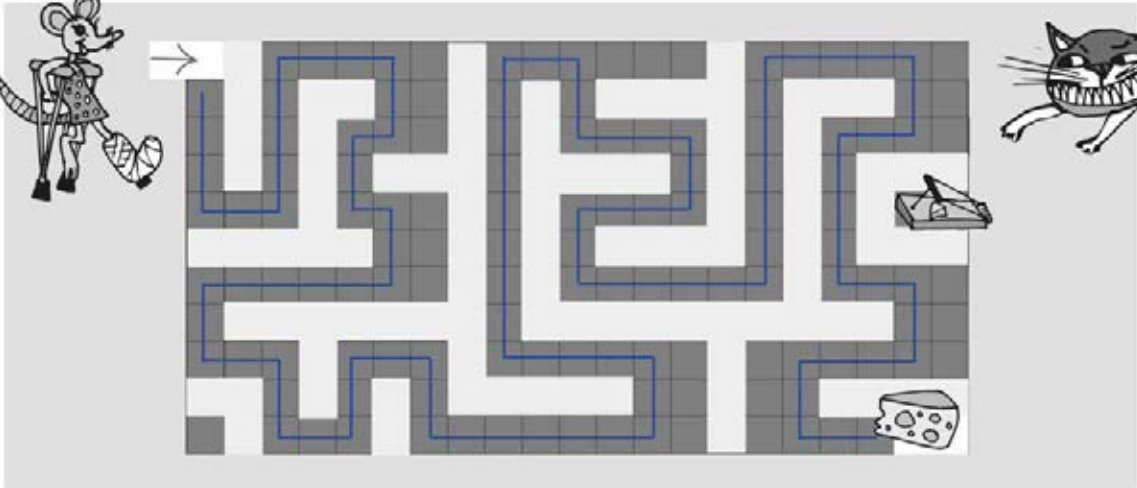
KOLIK DOHROMADY?

Copyright: © Nakladatelství Fraus, Plzeň 2007






10

MYŠKA HLEDÁ SÝR



VYBARVI 2



				
---	---	---	---	---

Copyright: © Nakladatelství Fraus, Plzeň 2007

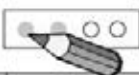
11

KOLIK DOHROMADY?

Copyright: © Nakladatelství Fraus, Plzeň 2007

12

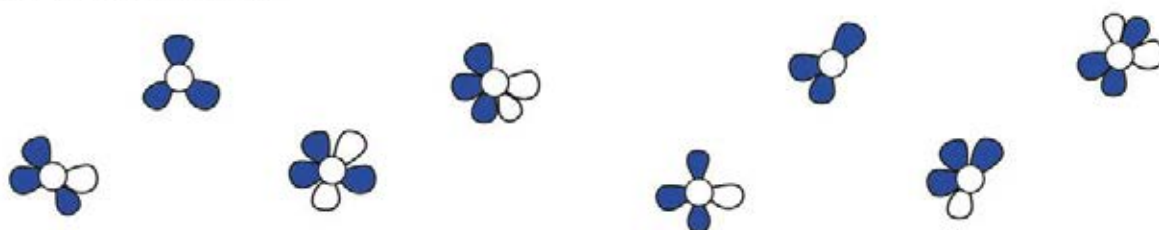
VYBARVI 2



--	--	--	--	--	--

ZAPIŠ KOLIK

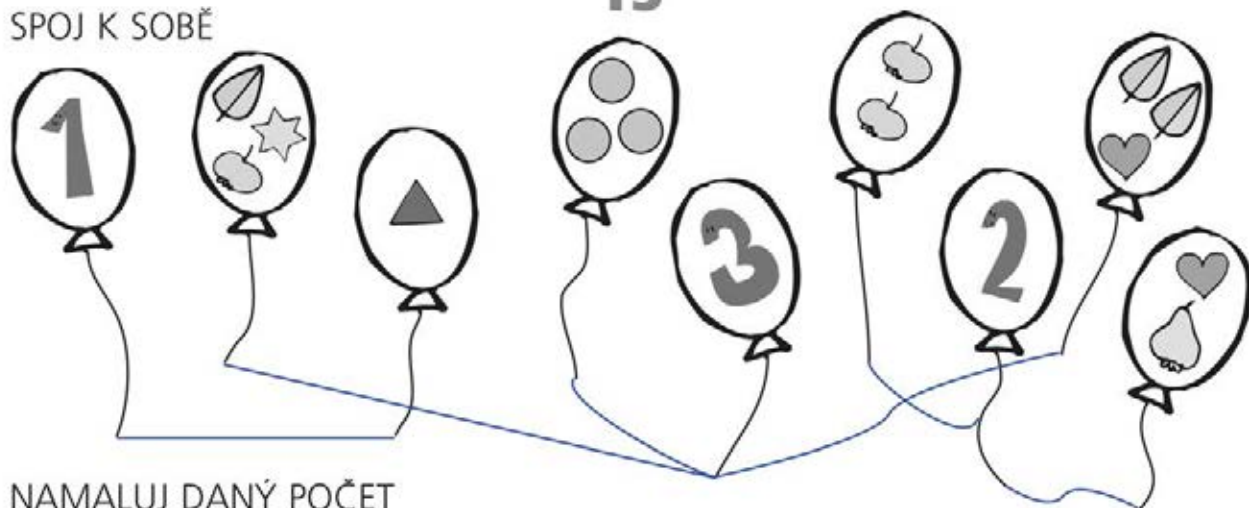
VYBARVI 3 LÍSTKY




Copyright: © Nakladatelství Fraus, Plzeň 2007

SPOJ K SOBĚ

13



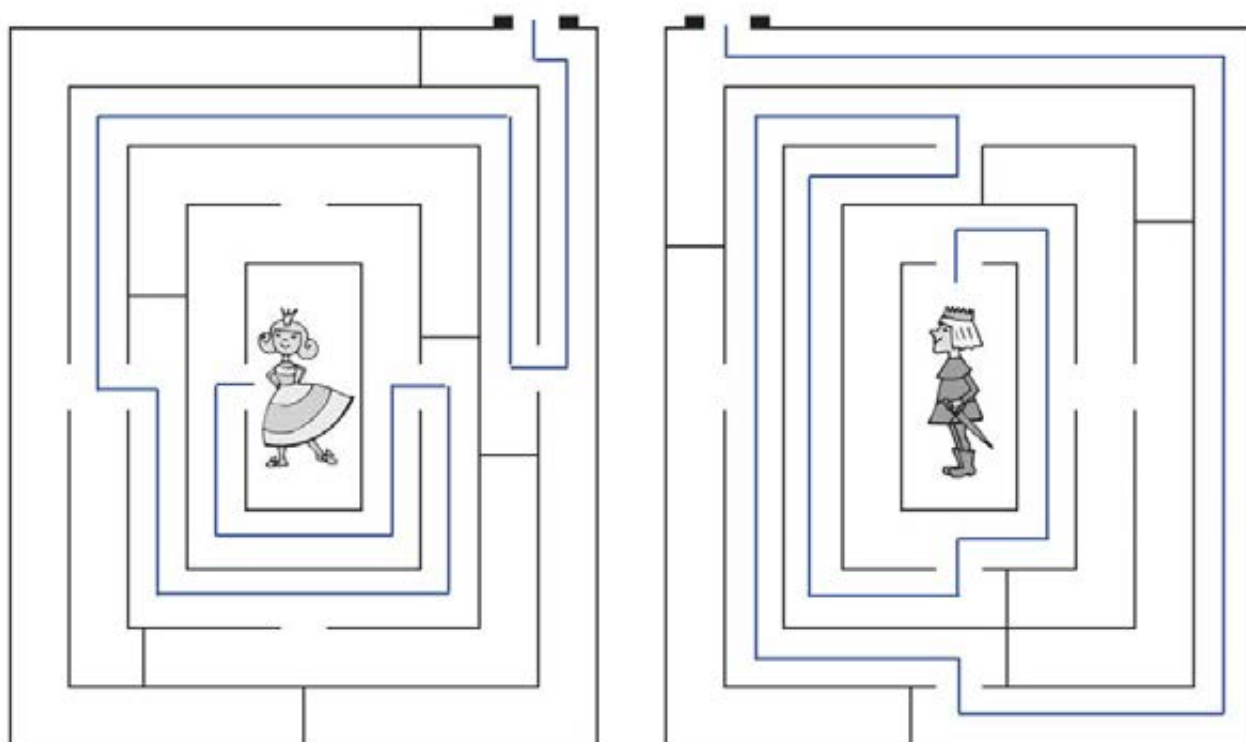
NAMALUJ DANÝ POČET



Copyright: © Nakladatelství Fraus, Pízeň 2007

KDO MÁ KRATŠÍ CESTU Z BLUDIŠTĚ?

14



Copyright: © Nakladatelství Fraus, Pízeň 2007

15

KOLIK DOHROMADY?

PŘEČTI, ZAPIŠ, DOMALUJ

3		2		1		3	

Copyright: © Nakladatelství Fraus, Plzeň 2007

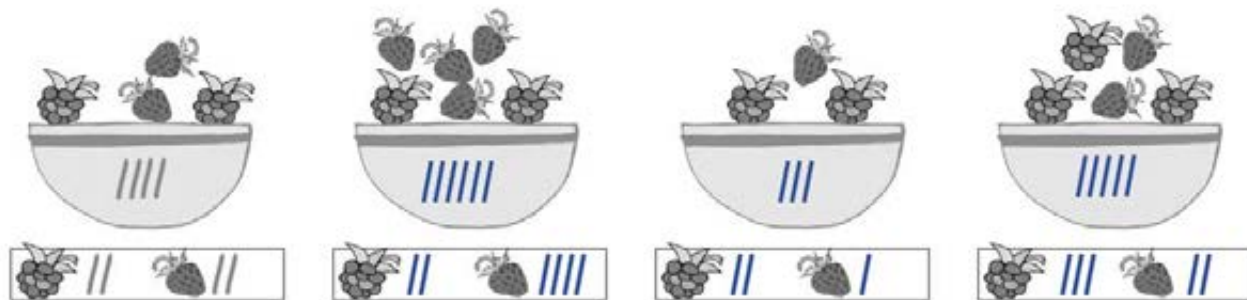
16

SPOJ K SOBĚ

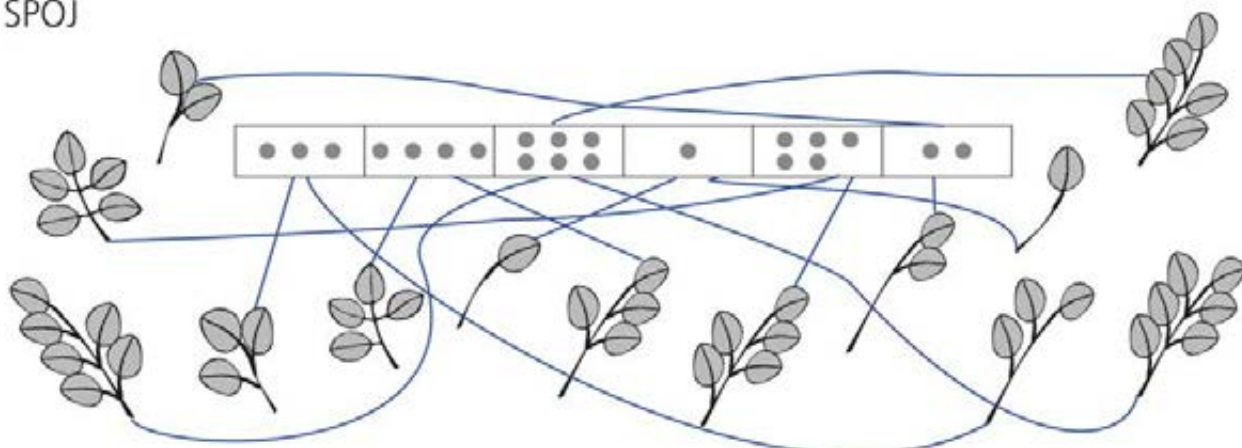
KOLIK VIDIŠ?

Copyright: © Nakladatelství Fraus, Plzeň 2007

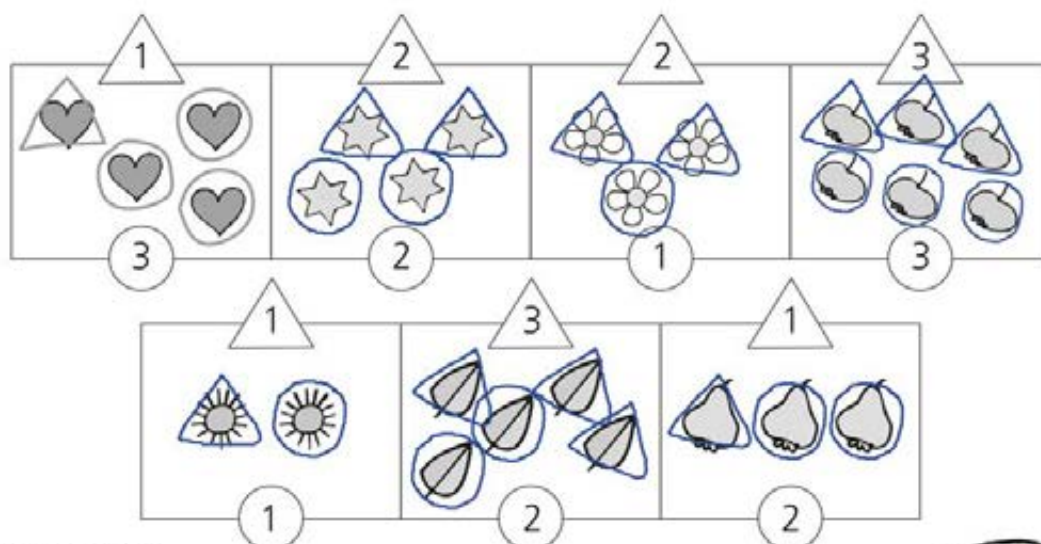
ZAPIŠ



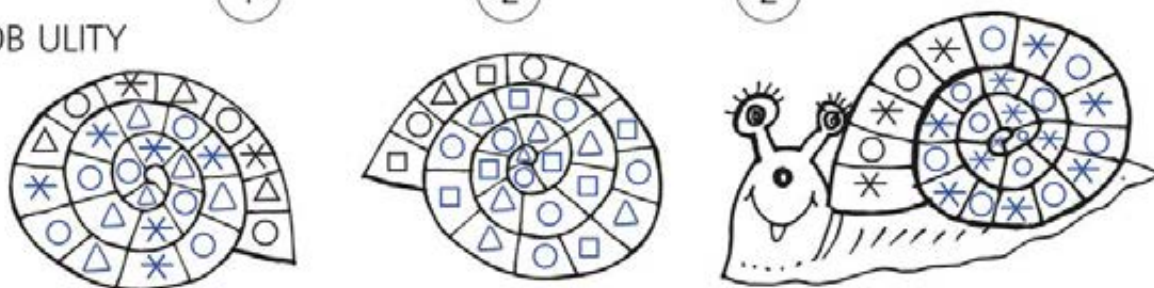
SPOJ








DEJ DO ○ A DO △ PODLE VZORU





DOZDOB ULITY


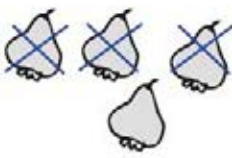




ZAPIŠ KOLIK





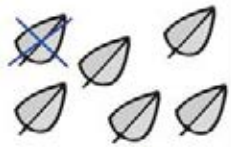

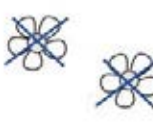
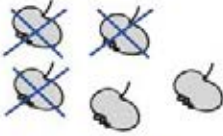
	///
	////
	//
	////
	/

	////
	///
	///
	////
	//

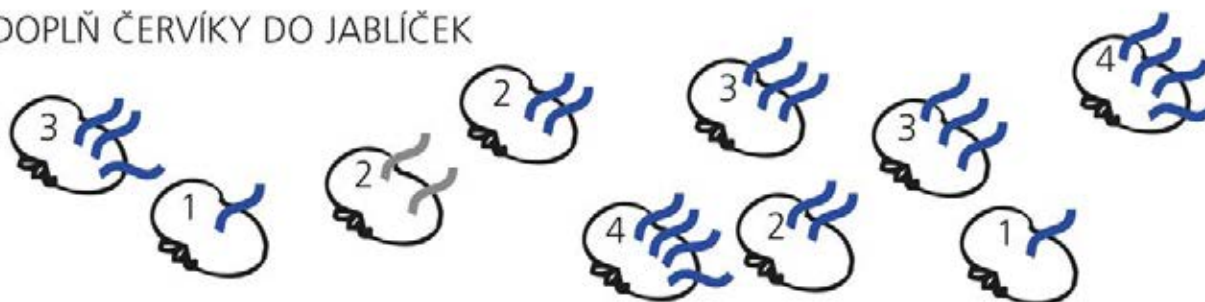
ŠKRTNI A ZAPIŠ

			
• • ///	• • • /	• • • • //	• /

ŠKRTNI A ZAPIŠ

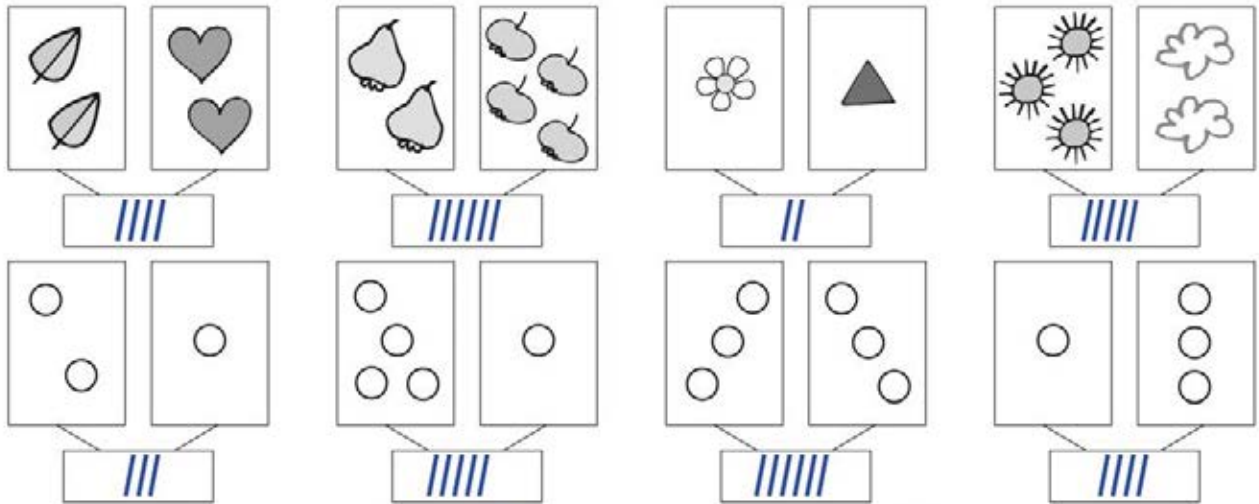
			
• //	• • • //	• ///	• • //
			
• ////	• ///	• •	• • • //

DOPLŇ ČERVÍKY DO JABLÍČEK

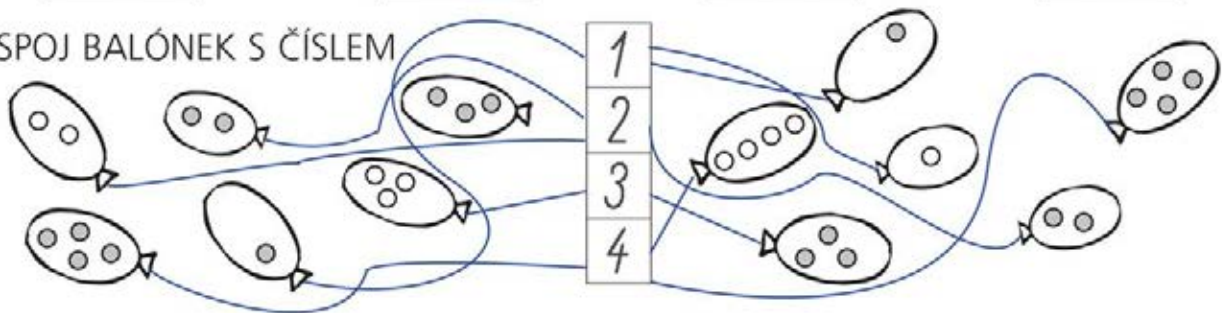


21

KOLIK DOHROMADY?



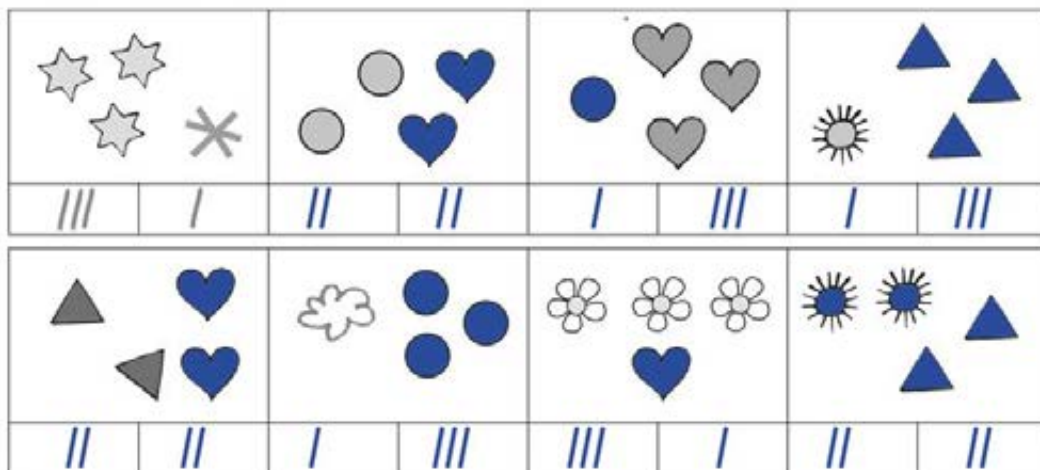
SPOJ BALÓNEK S ČÍSLEM



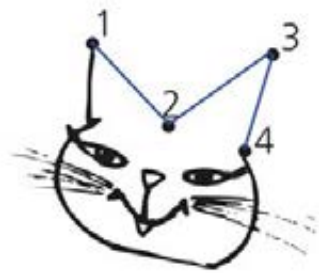
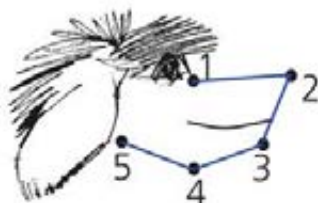
Copyright: © Nakladatelství Fraus, Pízeň 2007

22

ZAPIŠ A DOPLŇ DO 4



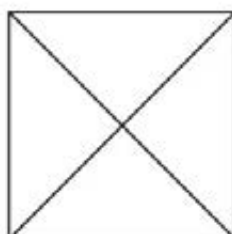
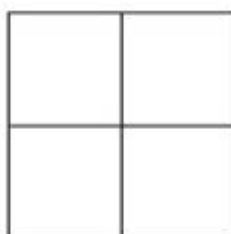
SPOJ K SOBĚ ČÍSLA A VYBARVI



Copyright: © Nakladatelství Fraus, Pízeň 2007

ŠKRTNI A ZAPIŠ

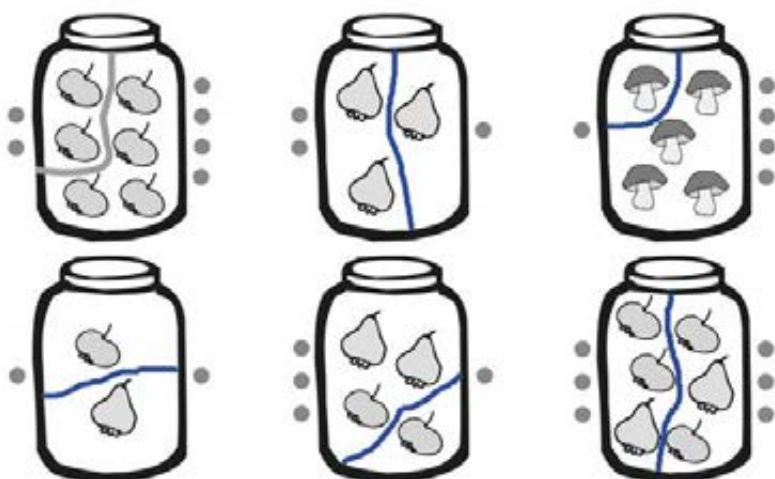
••	••	•••	•
•••••	•	•••	•••••



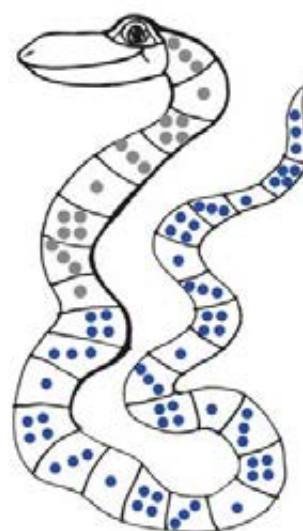
KOLIK VIDÍŠ \triangle A \square ?

\square ||||| \triangle |||||

ROZDĚL

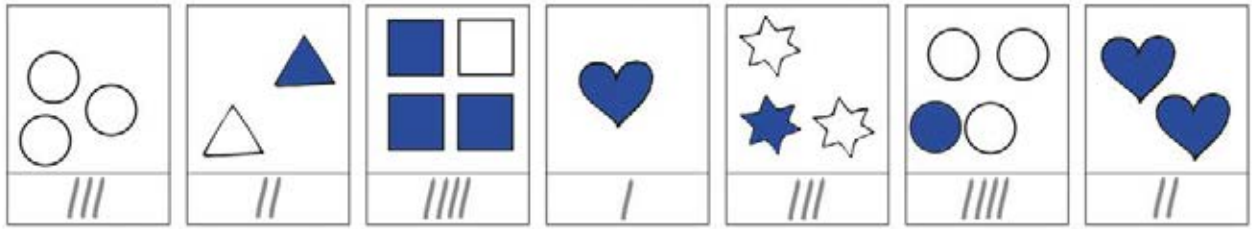


DOZDOB HADA

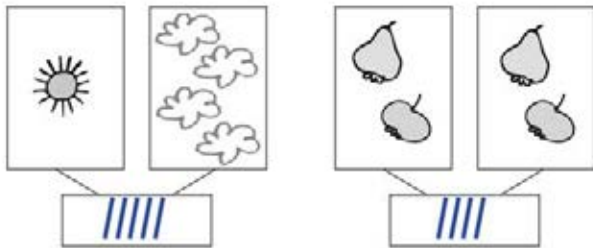
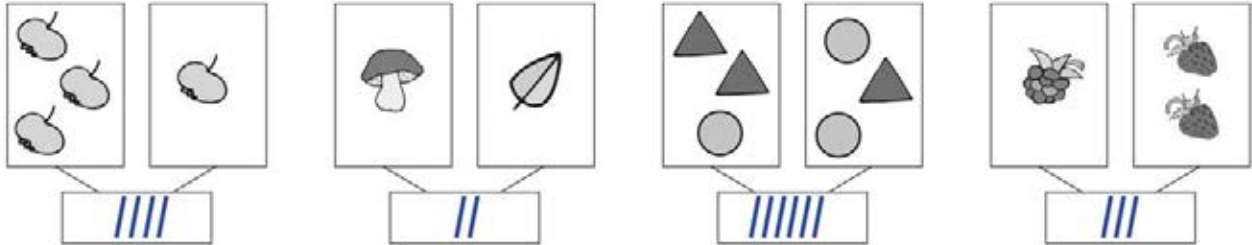


ZAPIŠ A DOPLŇ DO 4

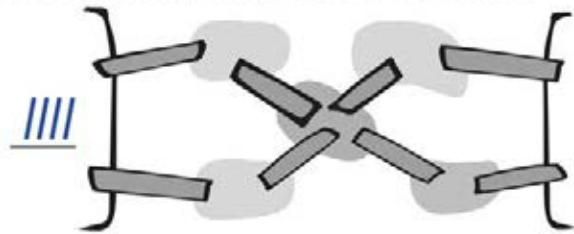
DOMALUJ



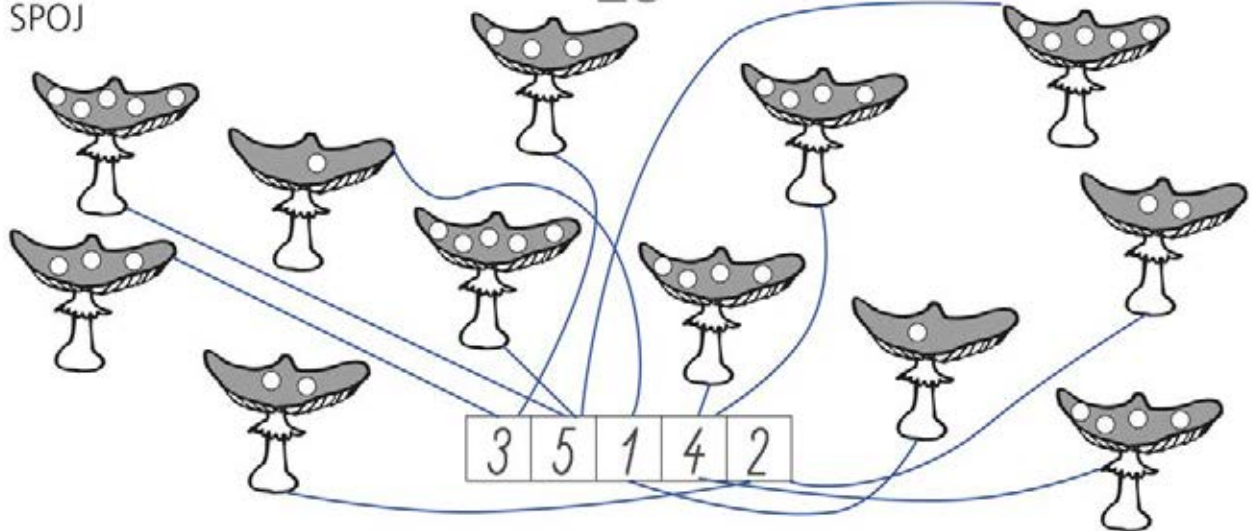
KOLIK DOHROMADY?



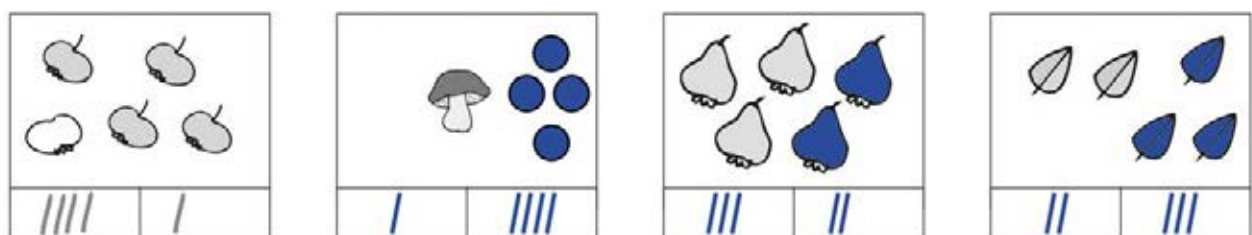
KOLIK CEST NAJDEŠ PŘES ŘEKU?



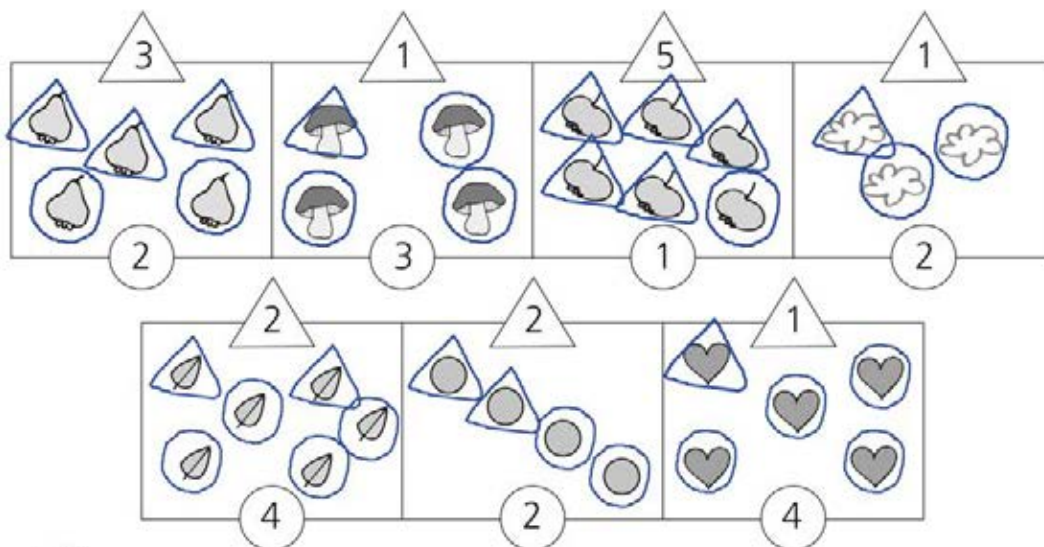
SPOJ



ZAPIŠ A DOPLŇ DO 5



DEJ DO ○ A DO △



VYBARVI
1 – ŽLUTÁ; 2 – HNĚDÁ; 3 – MODRÁ;
4 – ČERVENÁ; 5 – ORANŽOVÁ

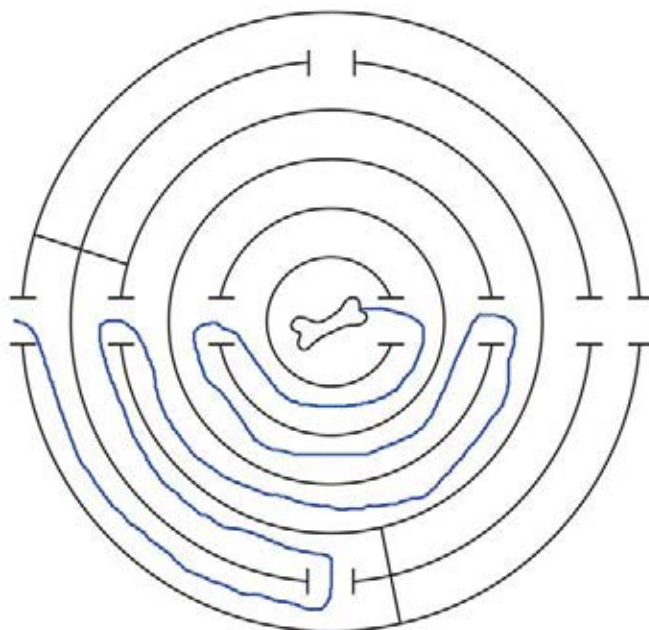
ŠKRTNI, NEBO DOPLŇ DO 3

3	5	3	3	3	5	3	3	3	5	3
3	3	5	3	3	5	3	3	5	3	3
3	5	3	5	3	5	3	5	3	5	3
5	5	3	3	1	1	1	3	3	3	5
3	5	3	2	2	1	2	2	3	5	3
3	3	1	2	3	1	3	2	1	3	3
5	5	1	1	1	1	1	1	1	5	5
3	3	1	1	4	1	4	1	1	3	3
3	5	3	1	4	4	4	1	3	5	3
5	3	3	3	1	1	1	3	3	3	5
3	3	3	5	3	5	3	5	3	3	3
3	3	5	3	3	5	3	3	5	3	3



29

KTERÝ PEJSEK SE DOSTANE KE KOSTI?



VYBARVI LÍSTKY

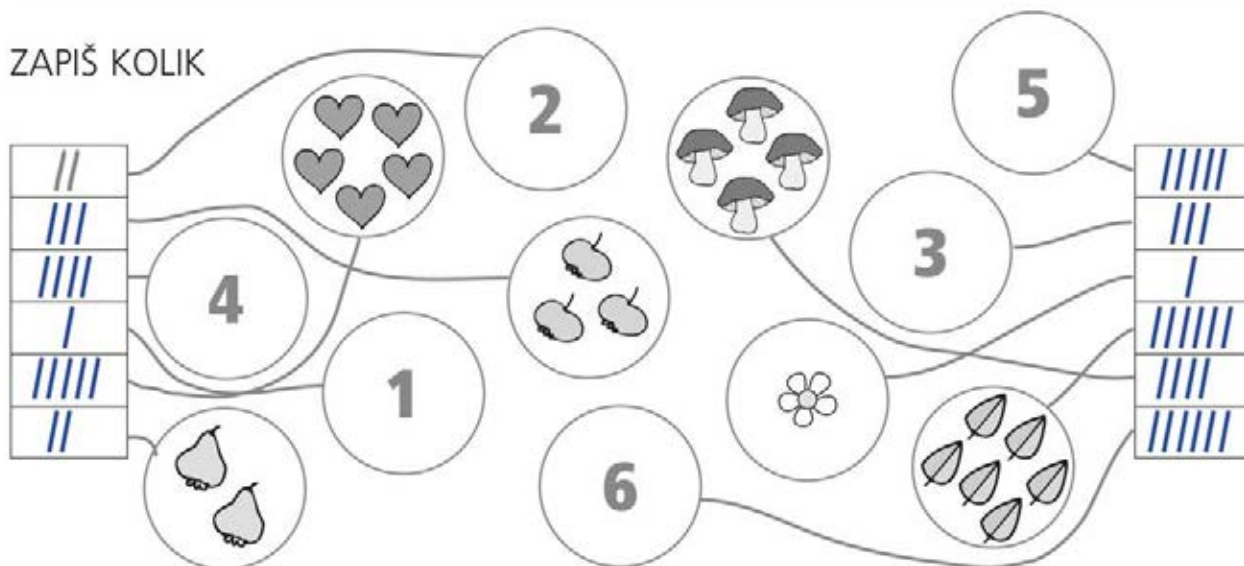
Copyright: © Nakladatelství Fraus, Pízeň 2007

30

ŠKRTNI, NEBO DOPLŇ DO 4



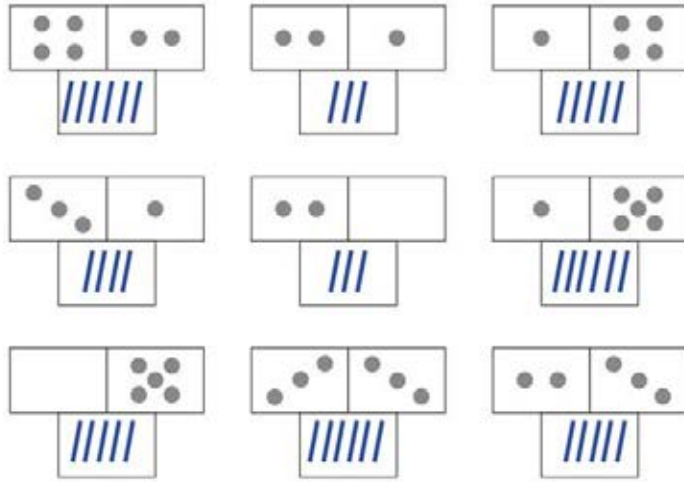
ZAPIŠ KOLIK



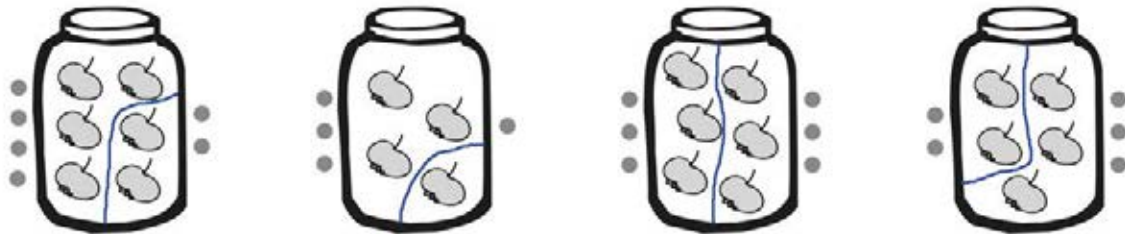
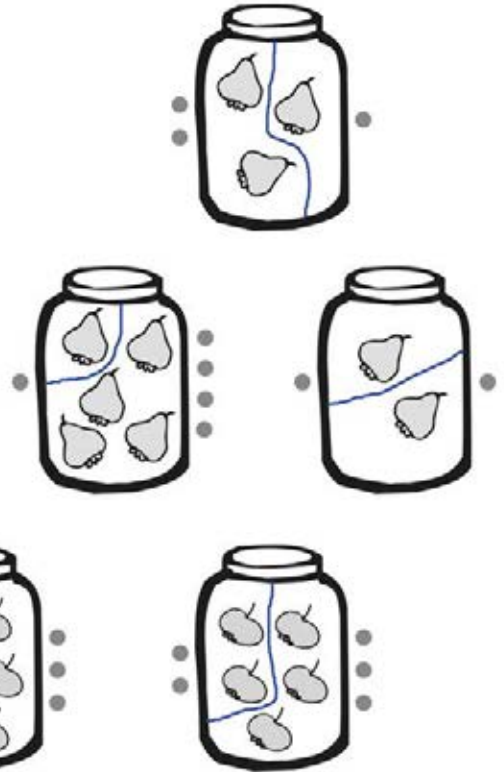
Copyright: © Nakladatelství Fraus, Pízeň 2007

31

SČÍTEJ



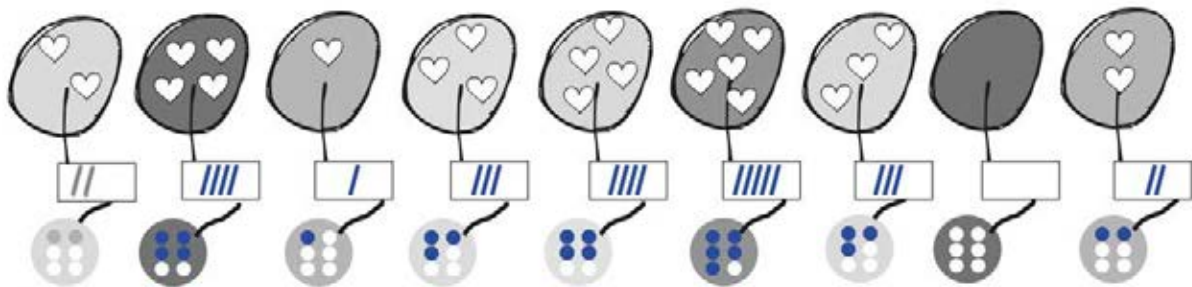
ROZDĚL



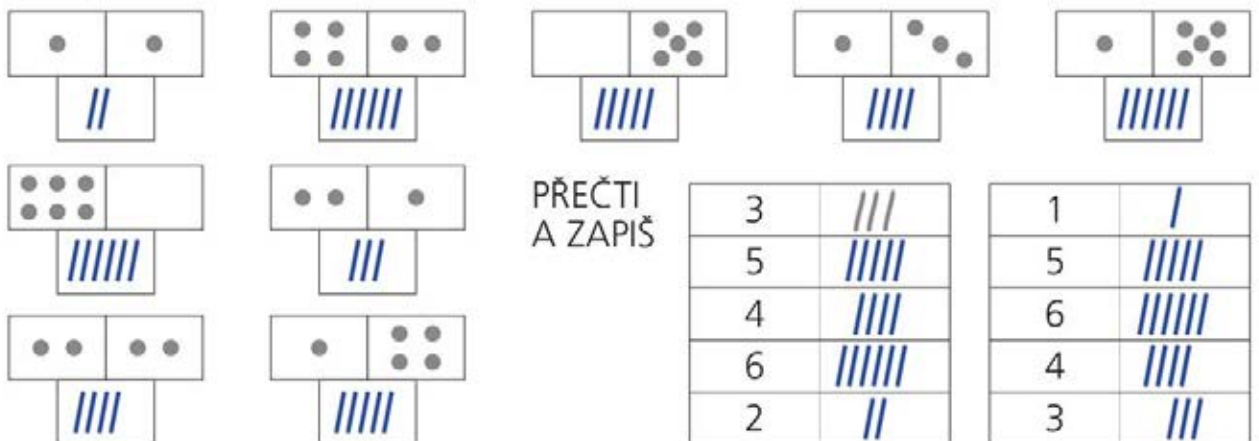
Copyright: © Nakladatelství Fraus, Plzeň 2007

32

ZAPIŠ A VYBARVI



SČÍTEJ



PŘEČTI
A ZAPIŠ

3	///	1	/
5	////	5	////
4	////	6	/////
6	/////	4	////
2	///	3	///

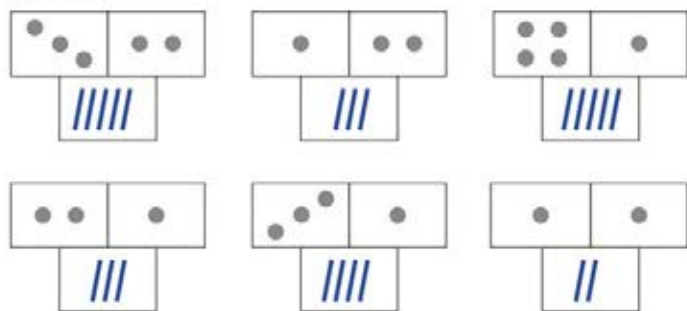
Copyright: © Nakladatelství Fraus, Plzeň 2007

33

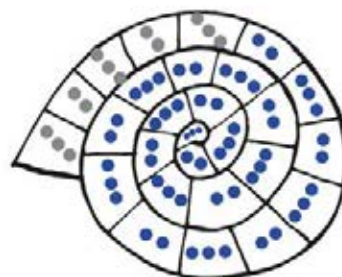
ROZDĚL



SČÍTEJ



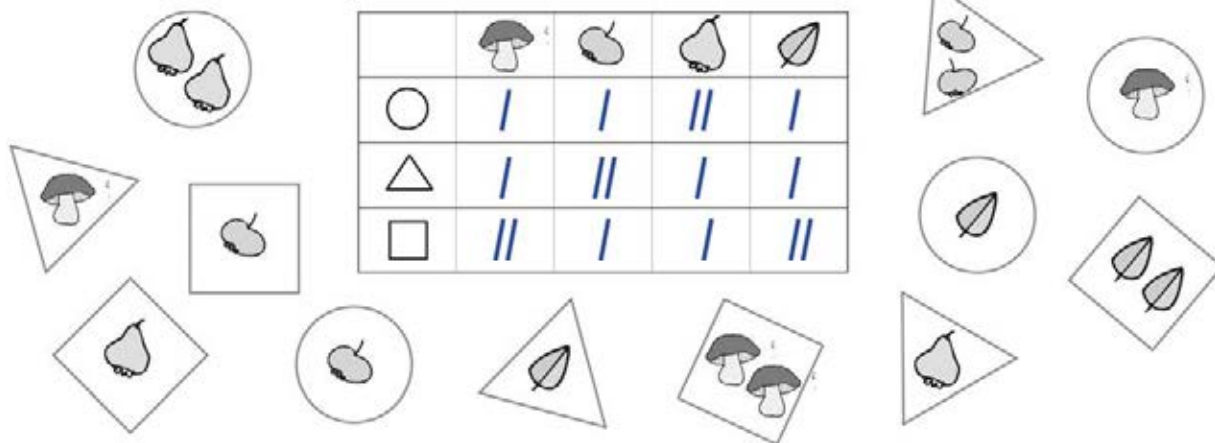
DOZDOB



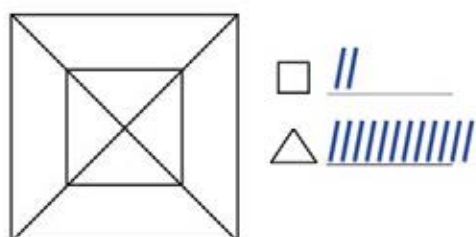
Copyright: © Nakladatelství Fraus, Plzeň 2007

34

DO TABULKY ZAPIŠ KOLIK



KOLIK VIDIŠ \triangle A \square ?



KOLIK VIDIŠ \circ NA CELÉM LISTU?



Copyright: © Nakladatelství Fraus, Plzeň 2007

35

SČÍTEJ

DOKRESLI MUCHOMŮRKÁM PUNTÍKY



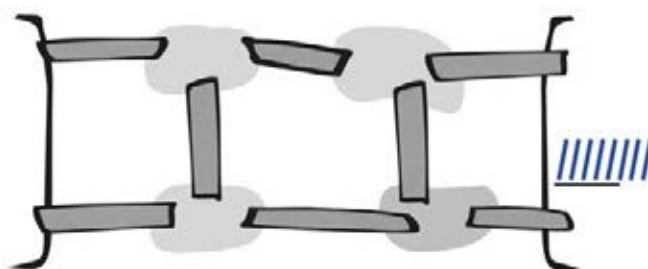
Copyright: © Nakladatelství Fraus, Plzeň 2007

36

ŠKRTNI, NEBO DOPLŇ DO 5

DOPLŇ ŘADU

KOLIK NAJDEŠ CEST?




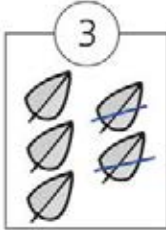

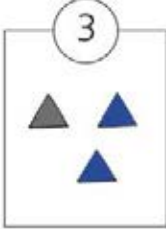

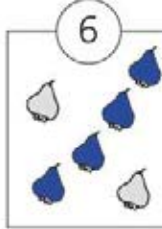
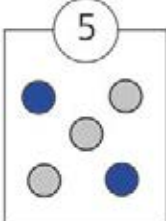
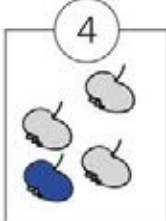

Copyright: © Nakladatelství Fraus, Plzeň 2007

VYBARVI A DOKONČI



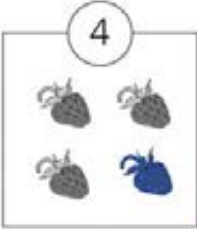
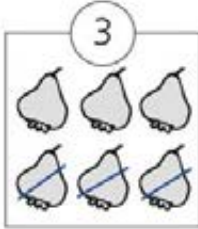
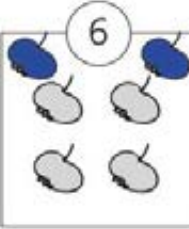

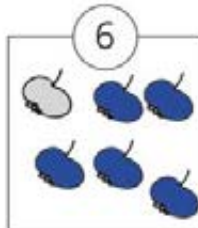
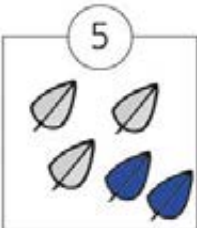
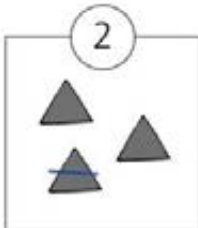
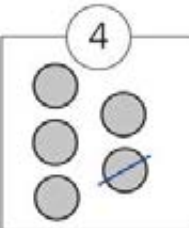
1 – ČERVENÁ; 2 – ORANŽOVÁ;
3 – MODRÁ; 4 – ŽLUTÁ

1	2	3	3	3	2	2													
2	2	3	3	2	4	4													
3	3	3	3	2	4	4													
3	3	2	2	2	4	4													
3	2	4	4	4	2	4													
3	2	4	4	4	4	1													
3	2	4	4	4	1	1													
3	3	2	2	2	1	1													
3	2	4	4	4	4	1													
3	2	4	4	4	4	2													
3	2	4	4	4	2	4													
3	3	2	2	2	4	4													
3	3	3	3	2	4	4													
3	3	3	3	2	4	4													
2	2	3	3	3	2	2													
1	2	3	3	3	3	3													

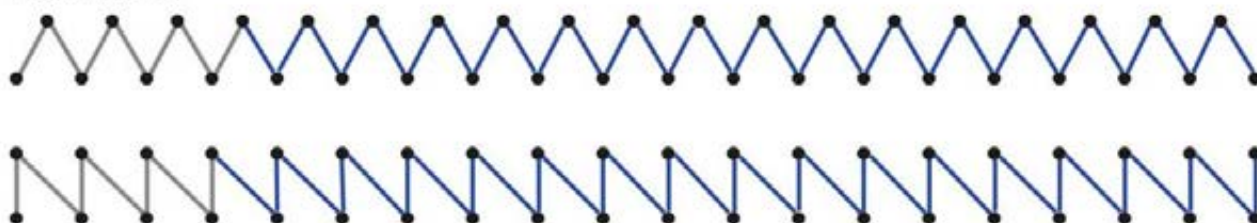
ŠKRTNI, NEBO DOPLŇ

ŠKRTNI, NEBO DOPLŇ

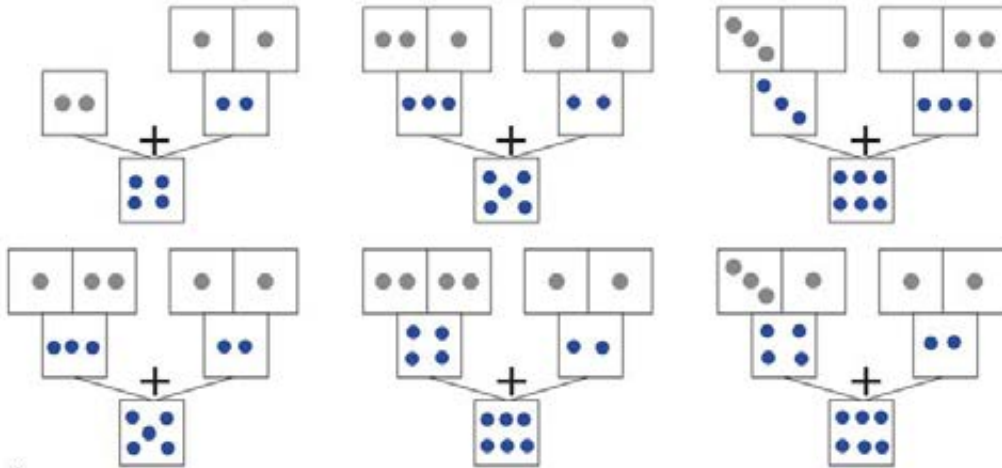
				
				

POKRAČUJ

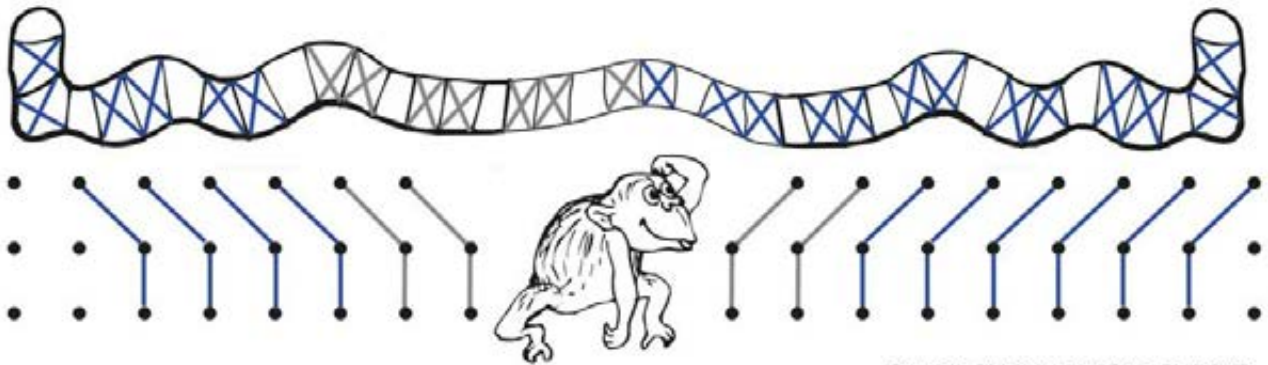


SČÍTEJ

39



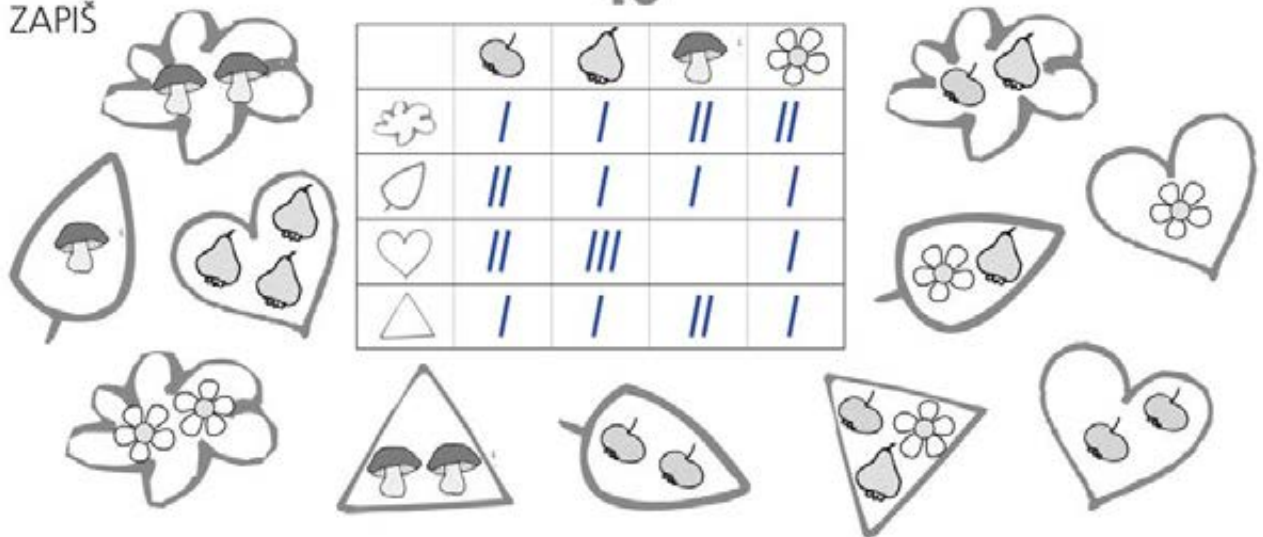
POKRAČUJ



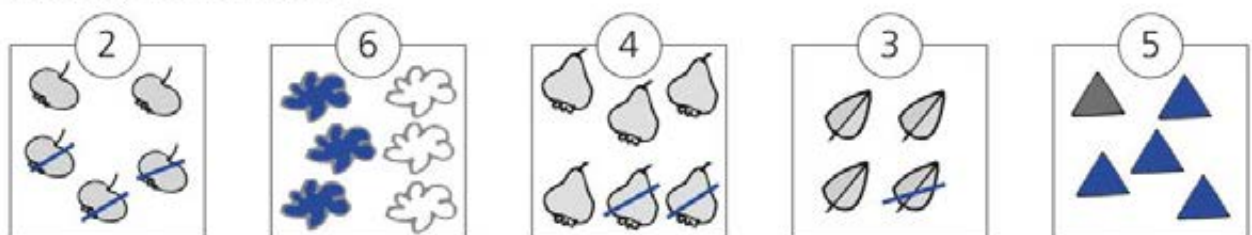
Copyright: © Nakladatelství Fraus, Pízeň 2007

ZAPIŠ

40



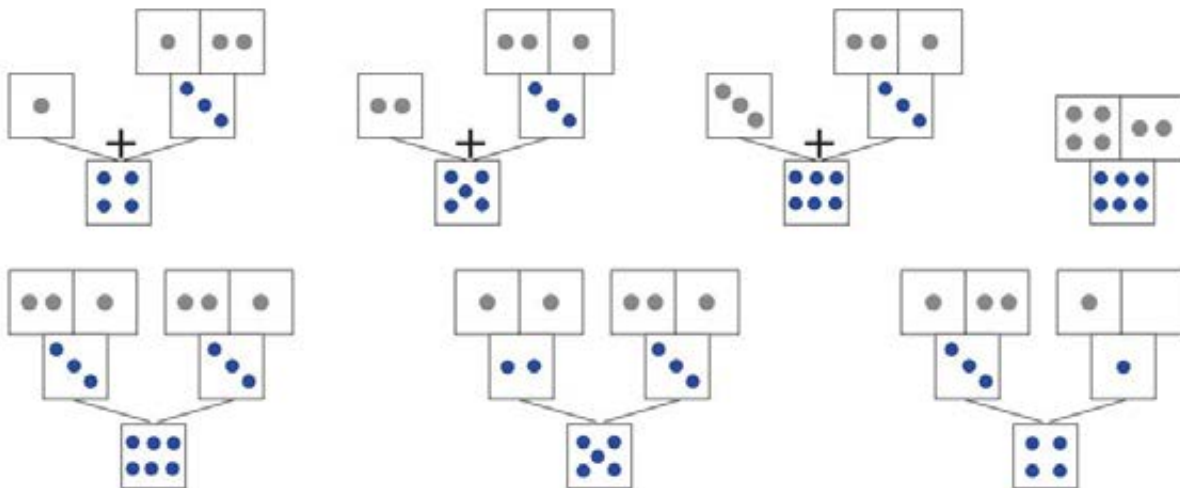
ŠKRTNI, NEBO DOPLŇ



Copyright: © Nakladatelství Fraus, Pízeň 2007

41

SČÍTEJ



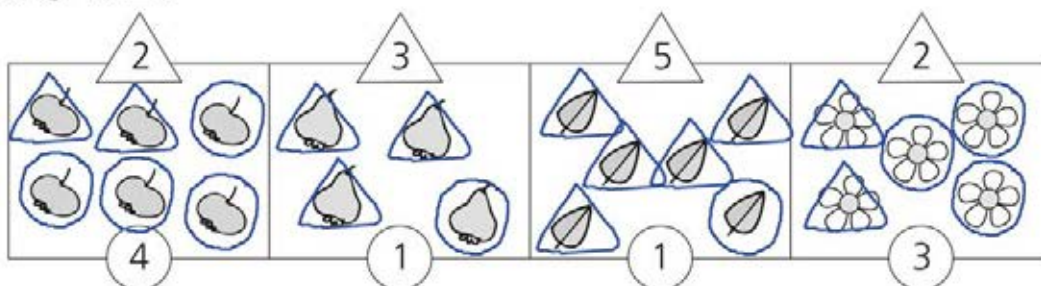
ZAPIŠ PLÁN STAVBY



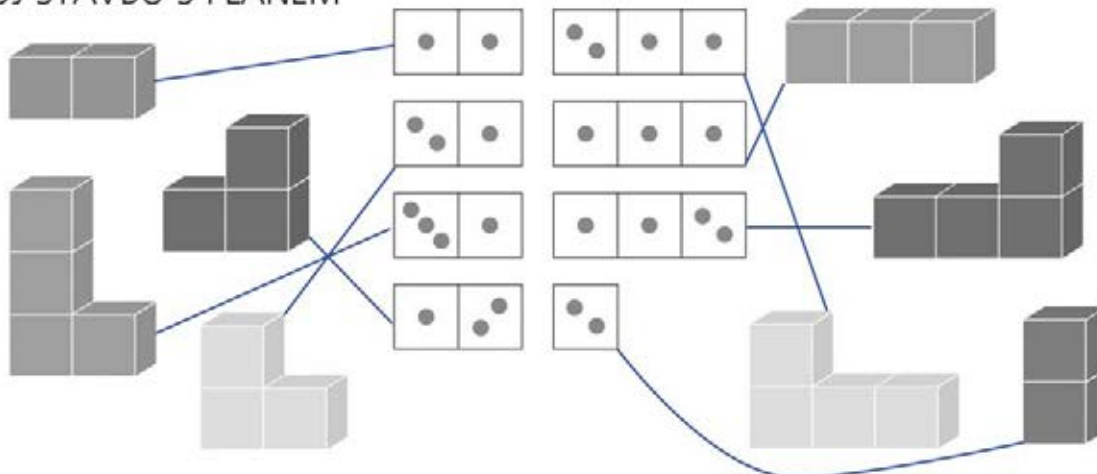
Copyright: © Nakladatelství Fraus, Pízeň 2007

42

DEJ DO ○ A △



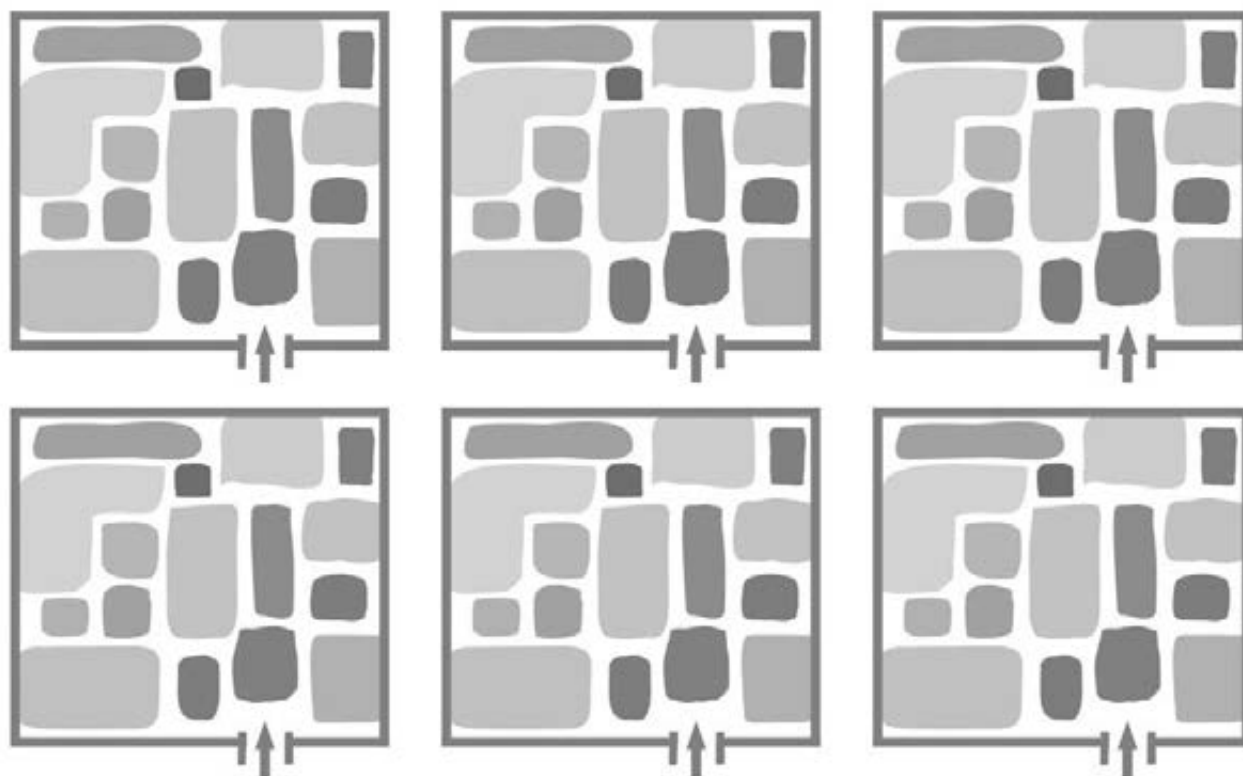
SPOJ STAVBU S PLÁNEM



Copyright: © Nakladatelství Fraus, Pízeň 2007

43

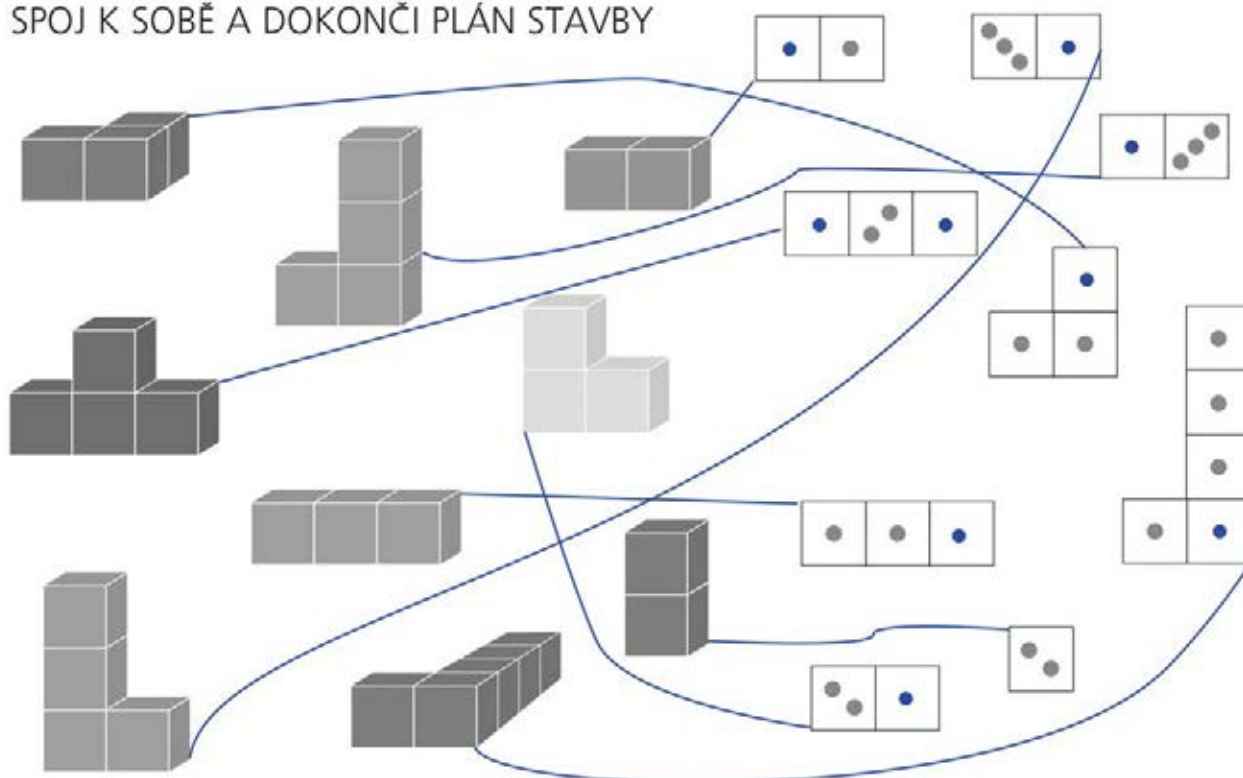
KOLIK NAJDEŠ CEST?
PO ŽÁDNÉ CESTĚ NESMÍŠ JÍT VÍCKRÁT



Copyright: © Nakladatelství Fraus, Plzeň 2007

44

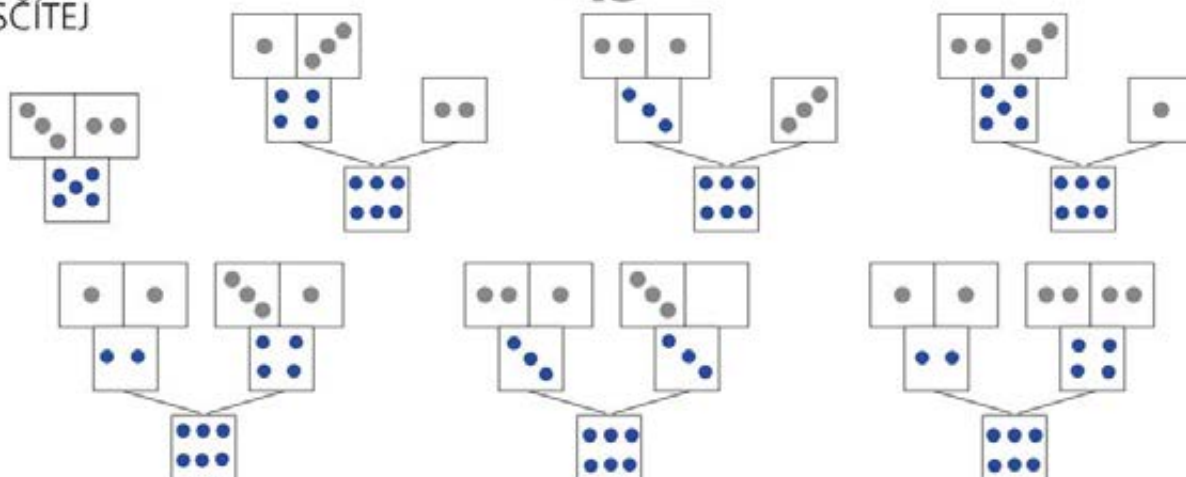
SPOJ K SOBĚ A DOKONČI PLÁN STAVBY



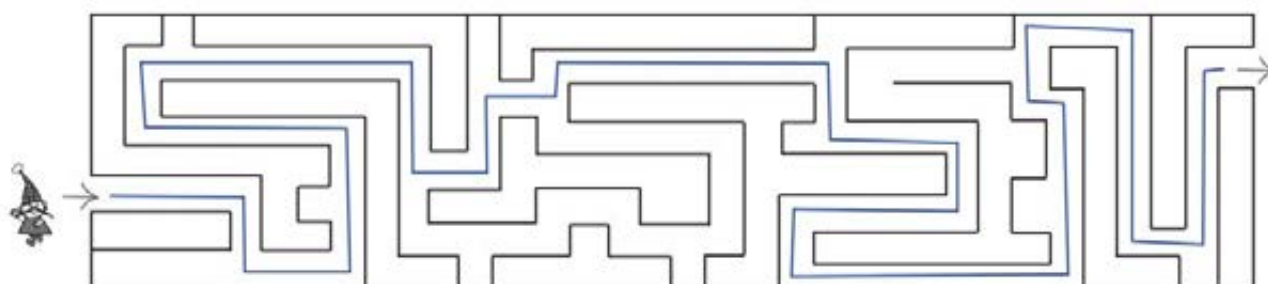
Copyright: © Nakladatelství Fraus, Plzeň 2007

SČÍTEJ

45



KOLIK CEST VEDE BLUDIŠTĚM?




Copyright: © Nakladatelství Fraus, Plzeň 2007

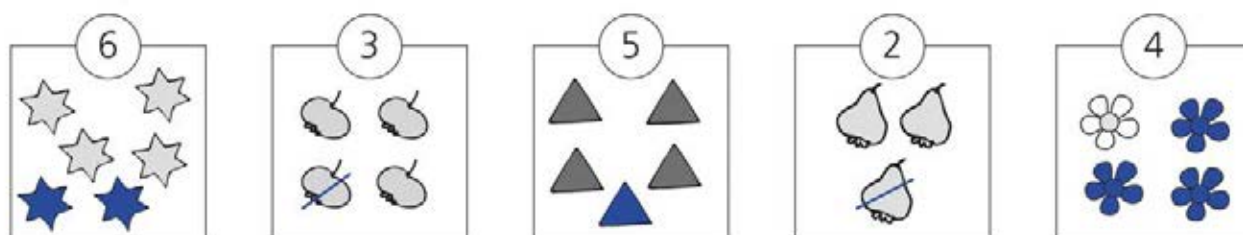
POROVNEJ A VYBARVI, KDE JE VÍC

46

POKRAČUJ

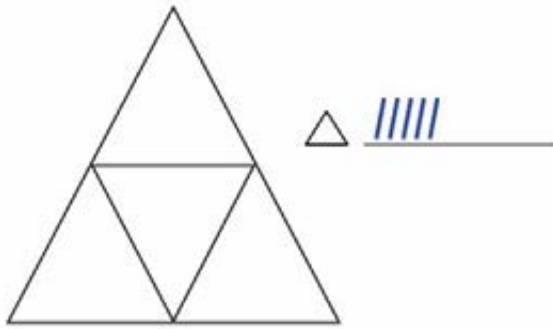


ŠKRTNI, NEBO DOPLŇ



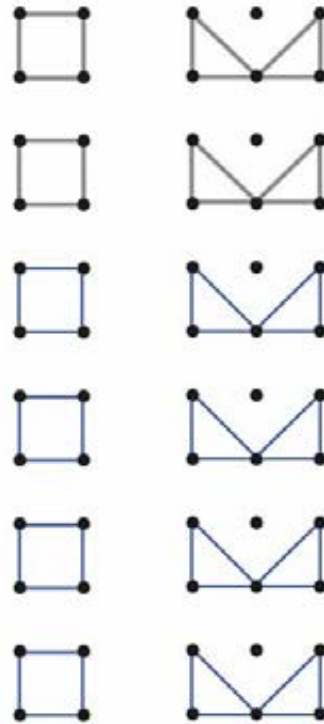
Copyright: © Nakladatelství Fraus, Plzeň 2007

KOLIK VIDÍŠ?




POSKLÁDEJ Z TVARŮ Z PŘÍLOHY

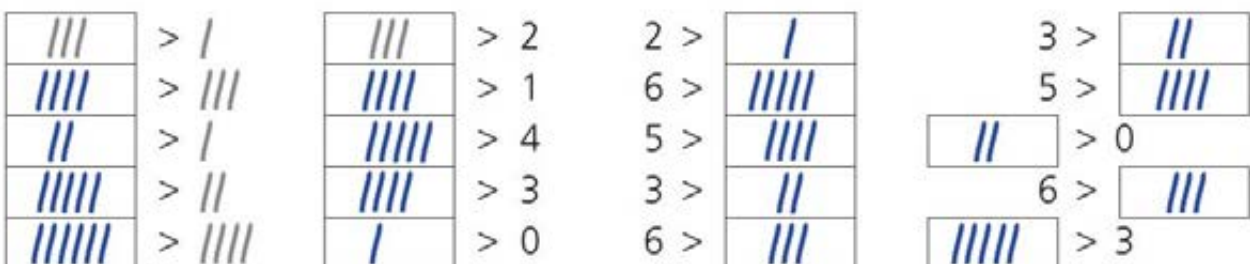
POKRAČUJ



POROVNEJ A VYBARVI, KDE JE VÍC

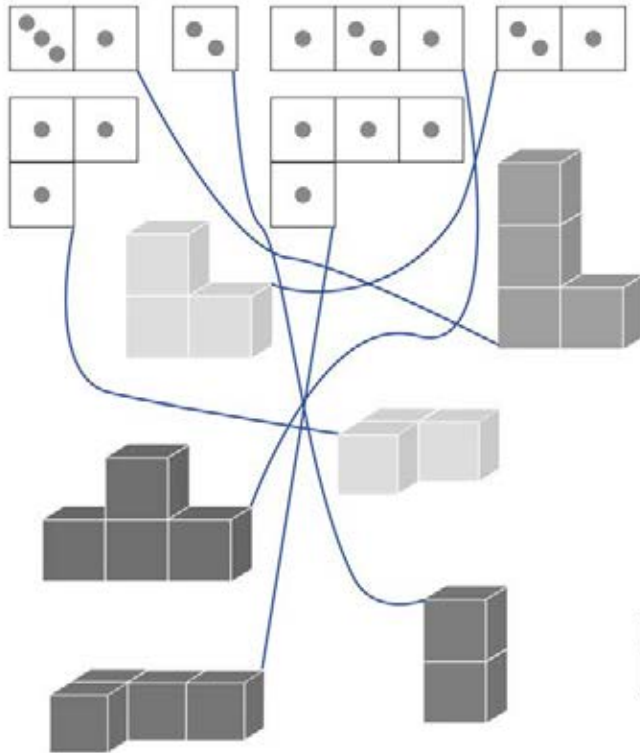


DOPLŇ A PŘEČTI




49

SPOJ PLÁN SE STAVBOU

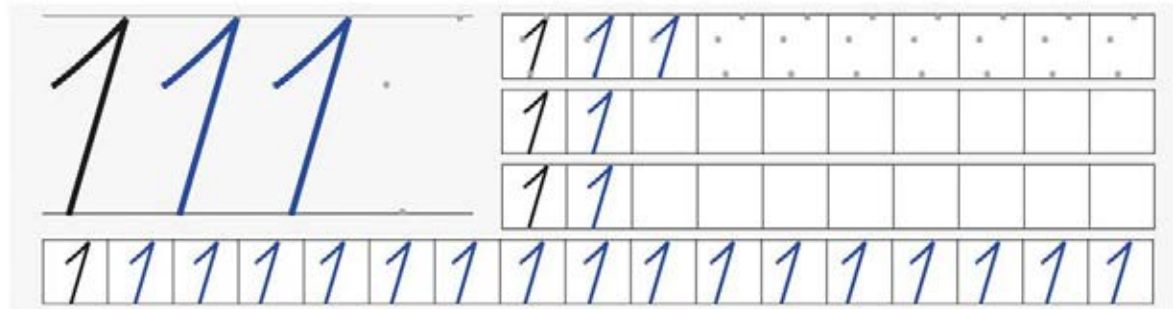


KOLIK CEST VEDE NA VRCHOL?

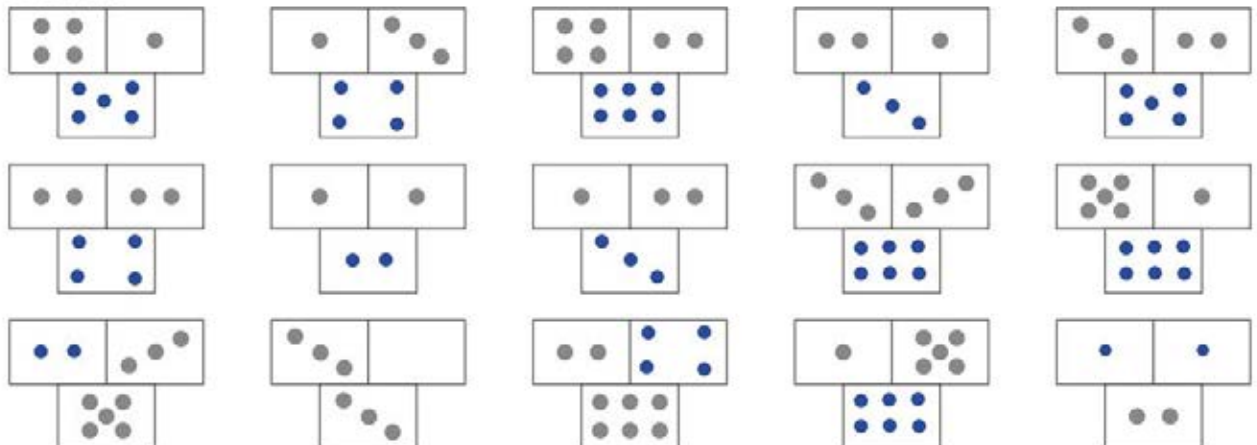


Copyright: © Nakladatelství Fraus, Plzeň 2007

50



DOPLŇ















Copyright: © Nakladatelství Fraus, Plzeň 2007

51






















DOPLŇ >, =

3 > 2	5 = 5	1 > 0
4 = 4	6 > 4	1 = 1
5 > 3	4 > 3	5 > 1
3 > 1	2 = 2	3 = 3

SČÍTEJ

	+		=	
	+		=	
	+		=	
	+		=	

SČÍTEJ

1 + 5 = 	2 + 4 = 	3 + 1 = 
2 + 2 = 	1 + 1 = 	2 + 3 = 
6 + 0 = 	3 + 3 = 	1 + 2 = 
1 + 3 = 	2 + 1 = 	0 + 5 = 
3 + 2 = 	4 + 0 = 	4 + 2 = 
4 + 1 = 	1 + 4 = 	5 + 1 = 
0 + 1 = 	3 + 0 = 	2 + 0 = 

Copyright: © Nakladatelství Fraus, Pízeň 2007






52

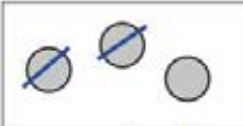


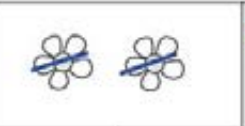

22

2	2	2
2	2								
2	2								

1 2 1 2 1 2 1 2 1 2 1 2 1 2 1 2 1

ŠKRTNI A ZAPIŠ



















				
3	4	1	4	1
/	/	//	//	/

				
2	5	3	2	2
/	/	//		//










Copyright: © Nakladatelství Fraus, Pízeň 2007

53

DOPLŇ A PŘEPIŠ

$4 + \boxed{2} = 6$	$4 + \boxed{1} = 5$	$3 + \boxed{2} = 5$
 +  = 	 +  = 	 +  = 
$2 + \boxed{2} = 4$	$5 + \boxed{1} = 6$	$2 + \boxed{1} = 3$
 +  = 	 +  = 	 +  = 






POČÍTEJ

$2 + 4 =$ 	$2 + 2 =$ 	$2 + 3 =$ 
$3 + 1 =$ 	$1 + 2 =$ 	$3 + 3 =$ 
$0 + 3 =$ 	$5 + 1 =$ 	$4 + 0 =$ 









POKRAČUJ

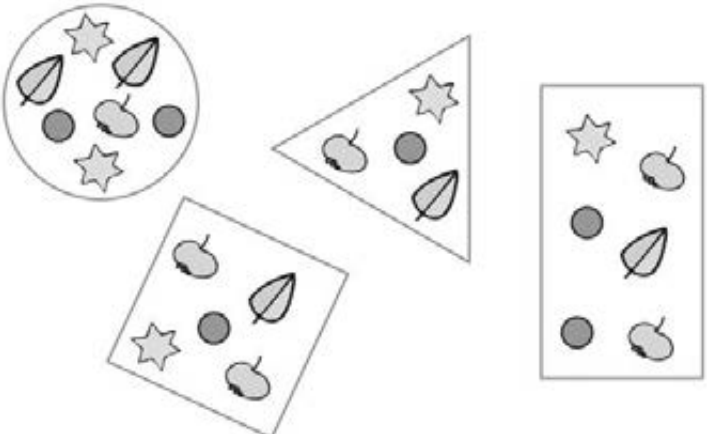


54


	
	
	
	

ZAPIŠ KOLIK

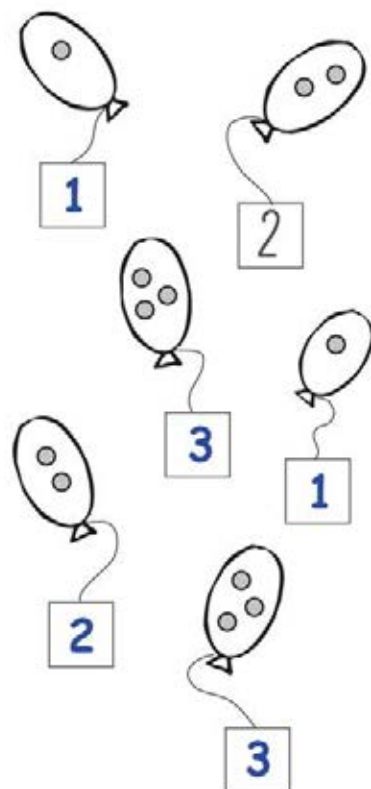
				
	/	//	/	/
	/	/	/	/
	//	/	//	//
	/	//	//	/



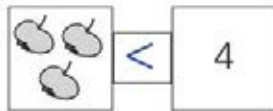
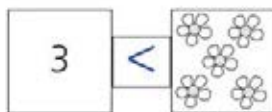
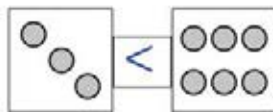
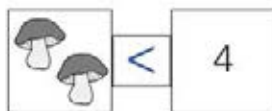
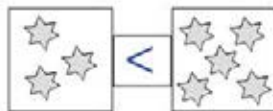
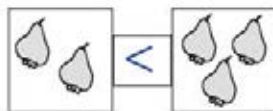
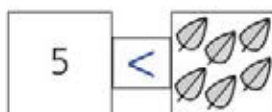
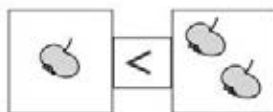
NAJDEŠ TRPASLÍKŮM CESTIČKY?



ZAPIŠ POČET



POROVNEJ



ŠKRTNI CHYBU, PŘEPIŠ ZNAMÉNKO

1 < 6 _____

2 ≠ 3 < _____

5 ≠ 4 > _____

3 < 5 _____

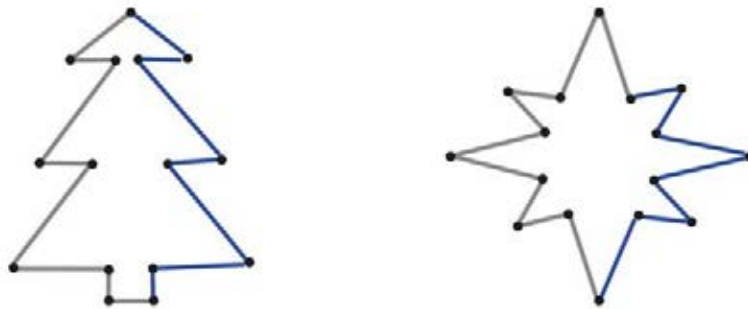
8 > 6 _____

57

SČÍTEJ

7	6	8	5	7

DOKRESLI



Copyright: © Nakladatelství Fraus, Plzeň 2007

58

PŘIDEJ, UBER 1 A ZAPIŠ

 $3 + 1 = 4$	 $1 + 1 = 2$	 $2 + 1 = 3$	 $3 + 1 = 4$
 $2 - 1 = 1$	 $4 - 1 = 3$	 $3 - 1 = 2$	 $4 - 1 = 3$

Copyright: © Nakladatelství Fraus, Plzeň 2007

59

DOPLŇ A PŘEPIŠ

$4 + \boxed{4} = 8$

$3 + \boxed{4} = 7$

 +  = 

 +  = 

$2 + \boxed{4} = 6$

$5 + \boxed{3} = 8$

 +  = 

 +  = 

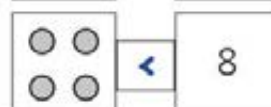
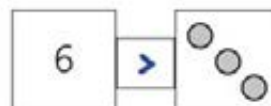
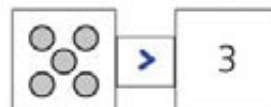
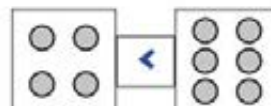
$3 + \boxed{2} = 5$

$2 + \boxed{4} = 6$

 +  = 

 +  = 

POROVNEJ

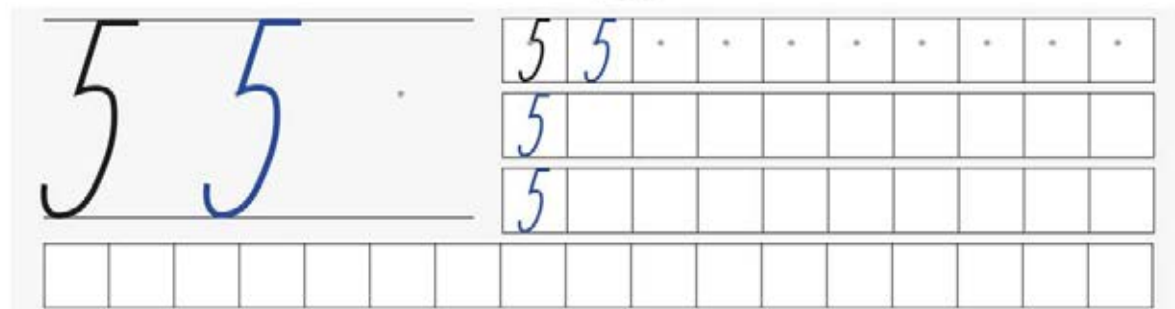


POKRAČUJ

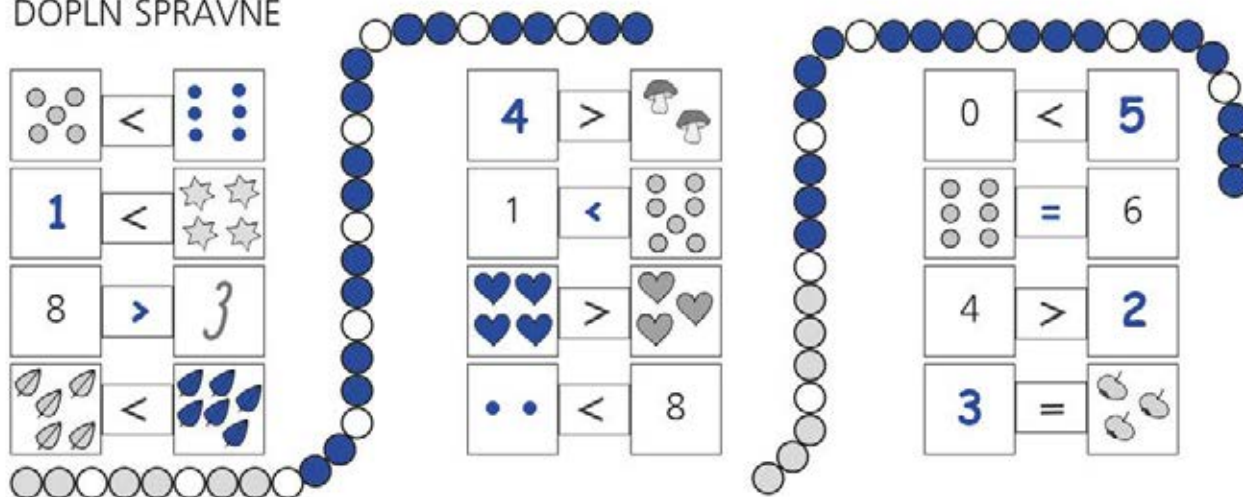


Copyright: © Nakladatelství Fraus, Pízeň 2007

60

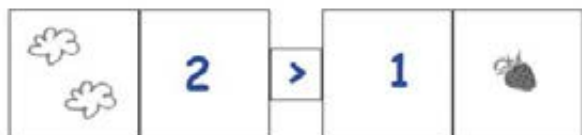


DOPLŇ SPRÁVNĚ

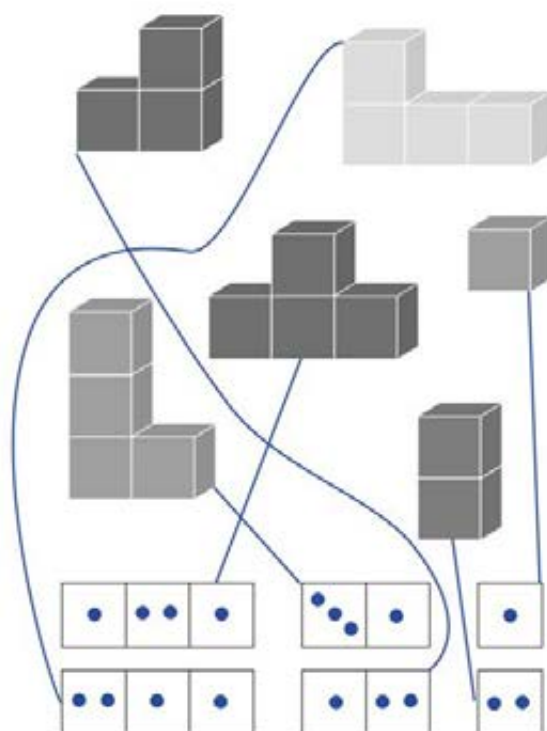


Copyright: © Nakladatelství Fraus, Pízeň 2007

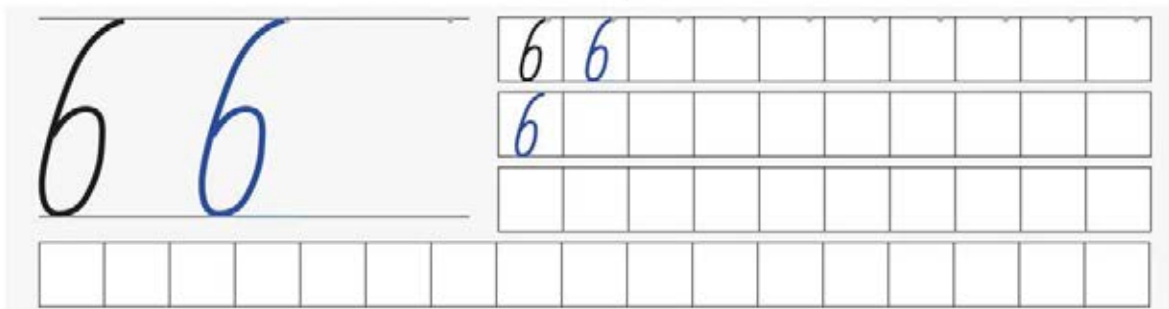
ZAPIŠ ČÍSLICÍ A POROVNEJ











VYTVOŘ STAVBU, SPOJ A ZAPIŠ JEJÍ PLÁN



Copyright: © Nakladatelství Fraus, Plzeň 2007




PŘIDEJ, UBER 2 A ZAPIŠ

 $1 + 2 = 3$	 $4 + 2 = 6$	 $2 + 2 = 4$	 $3 + 2 = 5$
 $6 - 2 = 4$	 $4 - 2 = 2$	 $3 - 2 = 1$	 $5 - 2 = 3$

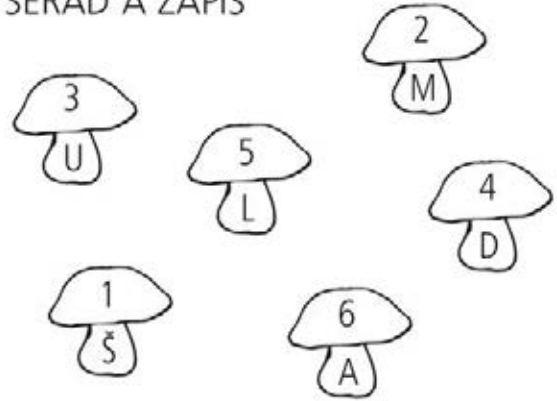
Copyright: © Nakladatelství Fraus, Plzeň 2007

POČÍTEJ A VYBARVUJ

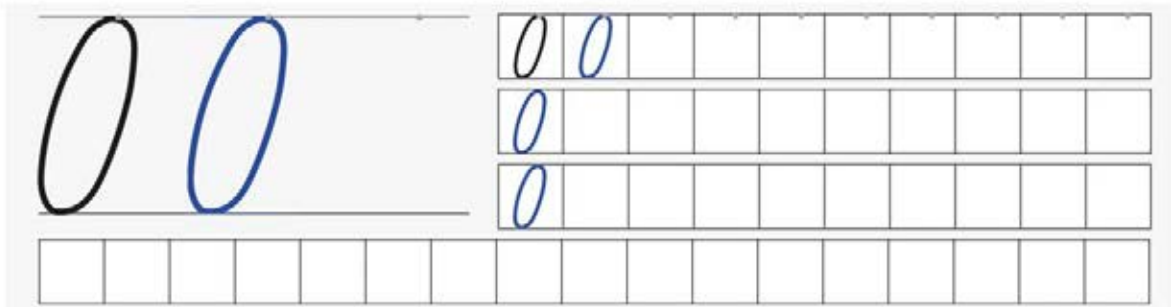


- 4 – HNĚDÁ
- 5 – ORANŽOVÁ
- 6 – ŽLUTÁ
- 7 – MODRÁ
- 8 – ČERVENÁ

SEŘAĎ A ZAPIŠ



1	2	3	4	5	6
Š	M	U	D	L	A



PŘIDEJ, UBER A ZAPIŠ

 $4 + 1 = 5$	 $6 - 1 = 5$	 $4 + 2 = 6$	 $5 - 2 = 3$
 $4 - 1 = 3$	 $2 + 2 = 4$	 $6 - 2 = 4$	 $3 + 1 = 4$

65

PŘIDEJ 1 A SČÍTEJ

$$\boxed{3} + \boxed{1} = \boxed{4}$$

$$\boxed{4} + \boxed{1} = \boxed{5}$$

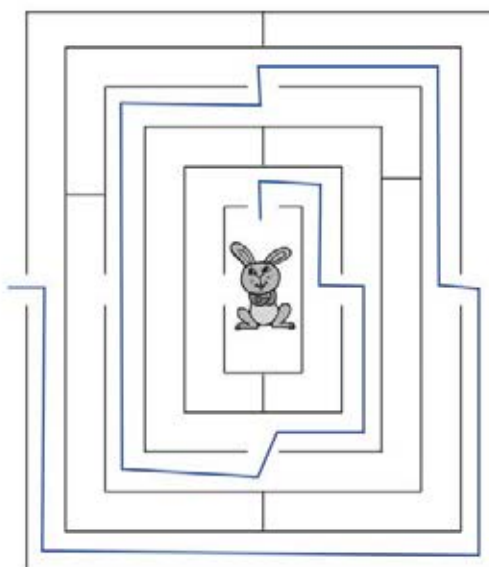
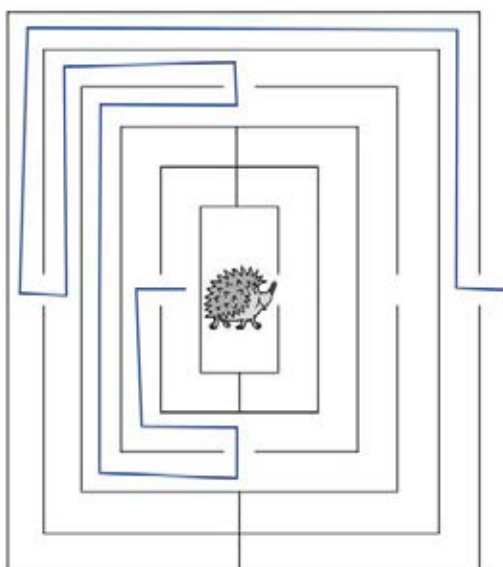
$$\boxed{5} + \boxed{1} = \boxed{6}$$

$$\boxed{2} + \boxed{1} = \boxed{3}$$

$$\boxed{1} + \boxed{1} = \boxed{2}$$

$$\boxed{0} + \boxed{1} = \boxed{1}$$

POMOZ ZVÍŘÁTKŮM NAJÍT CESTU VEN Z BLUDIŠTĚ



Copyright: © Nakladatelství Fraus, Plzeň 2007

66

KROKUJ A ZAPIŠ

$$\boxed{2} \rightarrow \rightarrow \boxed{4}$$

$$\begin{array}{c} \rightarrow \rightarrow \\ \boxed{1} \boxed{2} \boxed{3} \boxed{4} \boxed{5} \end{array}$$

$$\boxed{1} \rightarrow \rightarrow \boxed{3}$$

$$\begin{array}{c} \rightarrow \rightarrow \\ \boxed{0} \boxed{1} \boxed{2} \boxed{3} \boxed{4} \end{array}$$

$$\boxed{3} \rightarrow \rightarrow \boxed{5}$$

$$\begin{array}{c} \rightarrow \rightarrow \\ \boxed{2} \boxed{3} \boxed{4} \boxed{5} \boxed{6} \end{array}$$

$$\boxed{2} \rightarrow \rightarrow \rightarrow \boxed{5}$$

$$\begin{array}{c} \rightarrow \rightarrow \rightarrow \\ \boxed{2} \boxed{3} \boxed{4} \boxed{5} \boxed{6} \end{array}$$

$$\boxed{3} \rightarrow \rightarrow \boxed{5}$$

$$\begin{array}{c} \rightarrow \rightarrow \\ \boxed{2} \boxed{3} \boxed{4} \boxed{5} \boxed{6} \end{array}$$

$$\boxed{2} \rightarrow \rightarrow \boxed{4}$$

$$\begin{array}{c} \rightarrow \rightarrow \\ \boxed{1} \boxed{2} \boxed{3} \boxed{4} \boxed{5} \end{array}$$

$$\boxed{5} \rightarrow \rightarrow \boxed{7}$$

$$\begin{array}{c} \rightarrow \rightarrow \\ \boxed{4} \boxed{5} \boxed{6} \boxed{7} \boxed{8} \end{array}$$

$$\boxed{4} \rightarrow \boxed{5}$$

$$\begin{array}{c} \rightarrow \\ \boxed{2} \boxed{3} \boxed{4} \boxed{5} \boxed{6} \end{array}$$



$$\boxed{6} \rightarrow \rightarrow \boxed{8}$$

$$\begin{array}{c} \rightarrow \rightarrow \\ \boxed{5} \boxed{6} \boxed{7} \boxed{8} \boxed{9} \end{array}$$

$$\boxed{4} \rightarrow \rightarrow \boxed{6}$$

$$\begin{array}{c} \rightarrow \rightarrow \\ \boxed{3} \boxed{4} \boxed{5} \boxed{6} \boxed{7} \end{array}$$

$$\boxed{0} \rightarrow \rightarrow \boxed{2}$$

$$\begin{array}{c} \rightarrow \rightarrow \\ \boxed{0} \boxed{1} \boxed{2} \boxed{3} \boxed{4} \end{array}$$

$$\boxed{1} \rightarrow \rightarrow \rightarrow \boxed{4}$$

$$\begin{array}{c} \rightarrow \rightarrow \rightarrow \\ \boxed{0} \boxed{1} \boxed{2} \boxed{3} \boxed{4} \end{array}$$

Copyright: © Nakladatelství Fraus, Plzeň 2007

67

SČÍTEJ

$$\begin{array}{|c|c|} \hline 1 & 4 \\ \hline \end{array} = 5$$

$$\begin{array}{|c|c|} \hline 2 & 1 \\ \hline \end{array} = 3$$

$$\begin{array}{|c|c|} \hline 3 & 3 \\ \hline \end{array} = 6$$

$$\begin{array}{|c|c|} \hline 1 & 3 \\ \hline \end{array} = 4$$

$$\begin{array}{|c|c|} \hline 4 & 2 \\ \hline \end{array} = 6$$

UBER 1 A ODCÍTEJ

$$5 - 1 = 4$$

$$7 - 1 = 6$$







$$2 - 1 = 1$$


$$3 - 1 = 2$$

$$4 - 1 = 3$$

$$6 - 1 = 5$$

ZAPIŠ KOLIK

			
	2	2	3
	4	2	2
	1	3	2



Copyright: © Nakladatelství Fraus, Plzeň 2007

68

PŘIDEJ 2 A SČÍTEJ

$$4 + 2 = 6$$

$$0 + 2 = 2$$

$$3 + 2 = 5$$

$$2 + 2 = 4$$

$$1 + 2 = 3$$

$$4 + 2 = 6$$

UBER 2 A ODCÍTEJ

$$7 - 2 = 5$$

$$5 - 2 = 3$$

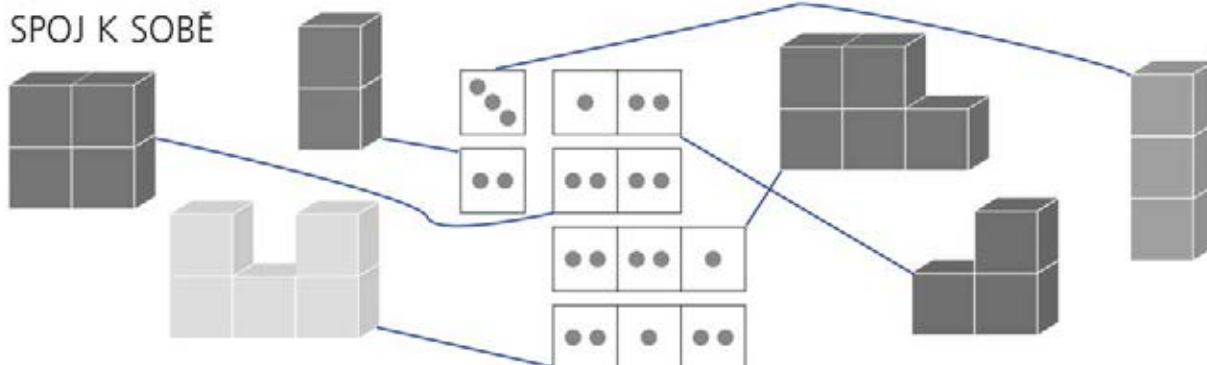
$$3 - 2 = 1$$

$$4 - 2 = 2$$

$$8 - 2 = 6$$

$$6 - 2 = 4$$

SPOJ K SOBĚ



Copyright: © Nakladatelství Fraus, Plzeň 2007

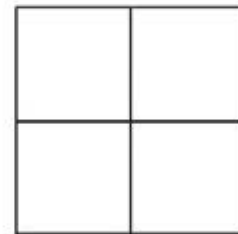
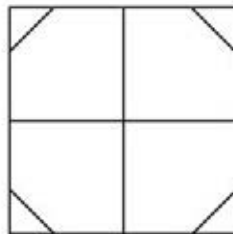
69

VYŘEŠ A PŘEPIŠ

3	+	1	=	4	3	→		4	4	+	1	=	5	4	→		5
4	+	2	=	6	4	→→		6	2	+	4	=	6	2	→→→→		6
2	+	2	=	4	2	→→		4	3	+	2	=	5	3	→→		5
5	+	1	=	6	5	→		6	2	+	1	=	3	2	→		3
3	+	3	=	6	3	→→→		6	4	+	2	=	6	4	→→		6
3	+	2	=	5	3	→→		5	5	+	0	=	5	5			5
2	+	1	=	3	2	→		3	1	+	3	=	4	1	→→→		4

VYBARVI

- 2 □ 1 □
 4 △ 4 □



Copyright: © Nakladatelství Fraus, Plzeň 2007

70

DOPLŇ ČÍSLA

0	3	1	6	3	5	4	2	3	1
3		7		8		6		4	
2	1	1	0	6	2	2	2	0	7
3		1		8		4		7	
3		5	1	1	1	4	1	5	3
7		6		2		5		8	
3	2	4	4	5	0	5	2	3	3
5		8		5		7		6	

POKRAČUJ



Copyright: © Nakladatelství Fraus, Plzeň 2007

VYŘEŠ A PŘEPIŠ

$$\boxed{2} + \boxed{3} = \boxed{5} \quad \boxed{2} \rightarrow \rightarrow \rightarrow \boxed{5}$$

$$\boxed{3} + \boxed{1} = \boxed{4} \quad \boxed{3} \rightarrow \quad \boxed{4}$$

$$\boxed{3} + \boxed{3} = \boxed{6} \quad \boxed{3} \rightarrow \rightarrow \rightarrow \boxed{6}$$

$$\boxed{1} + \boxed{2} = \boxed{3} \quad \boxed{1} \quad \quad \boxed{3}$$

$$\boxed{0} + \boxed{2} = \boxed{2} \quad \boxed{0} \rightarrow \rightarrow \quad \boxed{2}$$

$$\boxed{4} + \boxed{2} = \boxed{6} \quad \boxed{4} \rightarrow \rightarrow \quad \boxed{6}$$

$$\boxed{5} + \boxed{1} = \boxed{6} \quad \boxed{5} \rightarrow \quad \boxed{6}$$

$$\boxed{2} + \boxed{4} = \boxed{6} \quad \boxed{2} \rightarrow \rightarrow \rightarrow \rightarrow \boxed{6}$$

$$\boxed{2} + \boxed{3} = \boxed{5} \quad \boxed{2} \rightarrow \rightarrow \rightarrow \boxed{5}$$

$$\boxed{3} + \boxed{1} = \boxed{4} \quad \boxed{3} \rightarrow \quad \boxed{4}$$

$$\boxed{4} + \boxed{2} = \boxed{6} \quad \boxed{4} \rightarrow \rightarrow \quad \boxed{6}$$

$$\boxed{3} + \boxed{0} = \boxed{3} \quad \boxed{3} \quad \quad \boxed{3}$$

$$\boxed{1} + \boxed{1} = \boxed{2} \quad \boxed{1} \rightarrow \quad \boxed{2}$$


$$\boxed{2} + \boxed{2} = \boxed{4} \quad \boxed{2} \rightarrow \rightarrow \quad \boxed{4}$$

POKRAČUJ


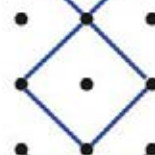




Copyright: © Nakladatelství Fraus, Plzeň 2007

KOLIK NAJDEŠ CEST?

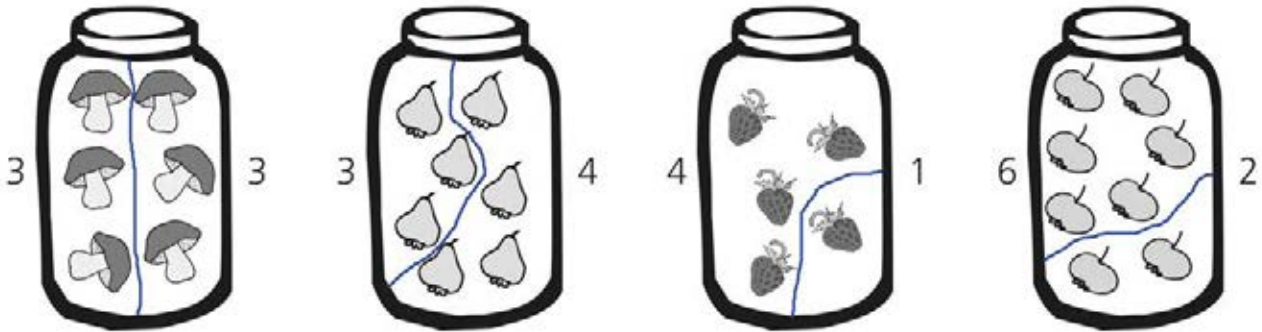


POKRAČUJ



Copyright: © Nakladatelství Fraus, Plzeň 2007

ROZDĚL



PŘIDEJ, UBER 1, NEBO 2

$$\boxed{3} + \boxed{1} = \boxed{4}$$

$$\boxed{5} - \boxed{1} = \boxed{4}$$

$$\boxed{2} + \boxed{2} = \boxed{4}$$

$$\boxed{4} - \boxed{1} = \boxed{3}$$

$$\boxed{1} + \boxed{1} = \boxed{2}$$

$$\boxed{5} + \boxed{2} = \boxed{7}$$

$$\boxed{8} - \boxed{2} = \boxed{6}$$

$$\boxed{4} + \boxed{2} = \boxed{6}$$

$$\boxed{6} - \boxed{1} = \boxed{5}$$

$$\boxed{6} + \boxed{2} = \boxed{8}$$

$$\boxed{7} - \boxed{2} = \boxed{5}$$

$$\boxed{3} - \boxed{1} = \boxed{2}$$

Copyright: © Nakladatelství Fraus, Pízeň 2007

DOPLŇ SPRÁVNĚ

0 3 4 0 3 4

$$\boxed{5} \quad \boxed{} \quad \begin{array}{c} \bullet \\ \bullet \\ \bullet \end{array}$$

$$\boxed{6} < \boxed{8}$$

$$\begin{array}{c} \bullet \bullet \\ \bullet \bullet \end{array} > \boxed{2}$$

$$\boxed{4} = \begin{array}{c} \bullet \bullet \\ \bullet \bullet \end{array}$$

$$\begin{array}{c} \bullet \\ \bullet \end{array} < \boxed{6}$$

$$\begin{array}{c} \bullet \bullet \\ \bullet \bullet \end{array} > \begin{array}{c} \bullet \bullet \\ \bullet \bullet \end{array}$$

6 2 5 6 2 5 6

$$\begin{array}{c} \bullet \bullet \\ \bullet \bullet \end{array} > \boxed{1}$$

$$\boxed{2} = \bullet \bullet$$

$$\begin{array}{c} \bullet \bullet \\ \bullet \bullet \end{array} > \boxed{1}$$

0 3 4 0 3 4 0 3 4 0 3 4 0

3 4 0 3

2 5 6 2 5

DOPLŇ <, >, =

$$\boxed{3} > \boxed{2}$$

$$\boxed{4} > \boxed{3}$$

$$\boxed{8} > \boxed{0}$$

$$\boxed{1} = \boxed{1}$$

$$\boxed{3} > \boxed{1}$$

$$\boxed{5} > \boxed{3}$$

$$\boxed{0} < \boxed{5}$$

$$\boxed{2} = \boxed{2}$$

$$\boxed{5} > \boxed{4}$$

$$\boxed{0} < \boxed{2}$$

$$\boxed{7} > \boxed{5}$$

$$\boxed{6} > \boxed{1}$$

$$\boxed{4} < \boxed{6}$$

$$\boxed{7} < \boxed{8}$$

$$\boxed{6} < \boxed{7}$$

$$\boxed{2} < \boxed{8}$$

$$\boxed{1} < \boxed{2}$$

$$\boxed{3} < \boxed{7}$$

$$\boxed{6} > \boxed{3}$$

$$\boxed{5} = \boxed{5}$$

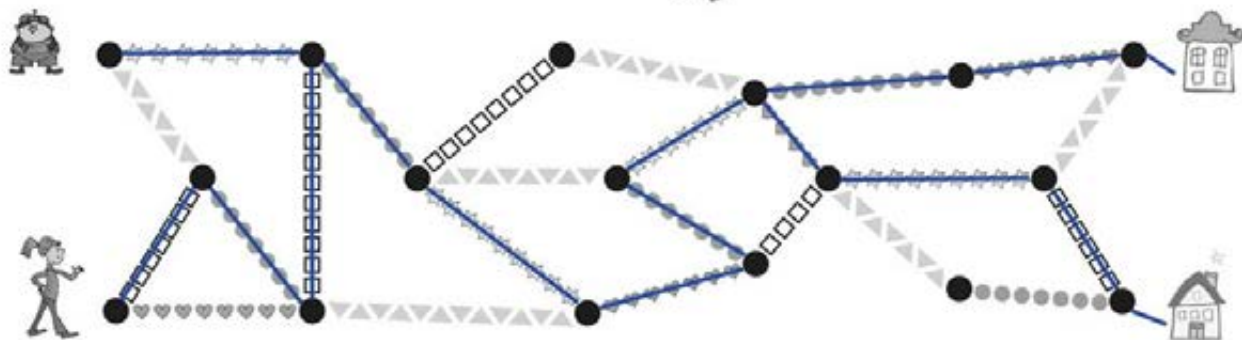
Copyright: © Nakladatelství Fraus, Pízeň 2007

VYŘEŠ A PŘEPÍŠ

3	-	2	=	1	3	←	←	1	
4	-	1	=	3	4	←		3	
6	-	3	=	3	6	←	←	←	3
4	-	2	=	2	4	←	←	2	

5	-	2	=	3	5	←	←	3	
8	-	2	=	6	8	←	←	6	
7	-	3	=	4	7	←	←	←	4
6	-	2	=	4	6	←	←	4	

KDE BYDLÍ?



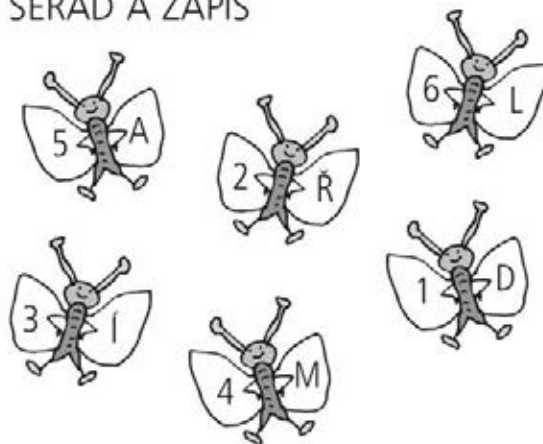
Copyright: © Nakladatelství Fraus, Plzeň 2007

POČÍTEJ A VYBARVUJ



- | | |
|--------------|-------------|
| 2 – ORANŽOVÁ | 6 – ZELENÁ |
| 3 – HNĚDÁ | 7 – MODRÁ |
| 4 – ČERVENÁ | 8 – FIALOVÁ |
| 5 – ŽLUTÁ | |

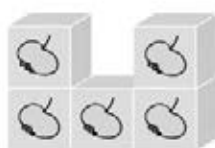
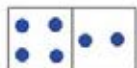
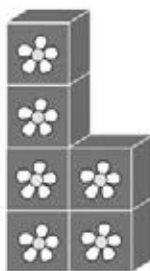
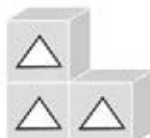
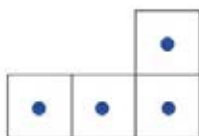
SEŘAĎ A ZAPIŠ



1	2	3	4	5	6
D	Ř	Í	M	A	L

Copyright: © Nakladatelství Fraus, Plzeň 2007

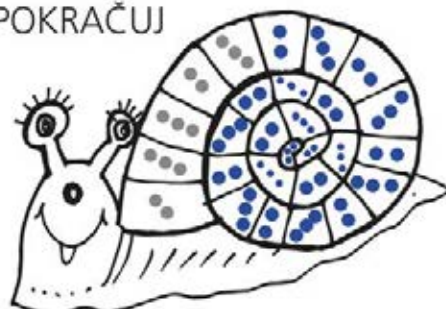
ZAPIŠ PLÁN STAVBY



ZAPIŠ KOLIK

	podlaží			
	1.	2.	3.	4.
○	4	0	0	0
△	2	1	0	0
🌸	2	2	1	1
□	3	1	0	0
🍏	3	2	0	0

POKRAČUJ



Copyright: © Nakladatelství Fraus, Plzeň 2007

ŠKRTNI, KDE JE CHYBA, OPRAV JEDNO ČÍSLO A PŘEPIŠ SPRÁVNĚ

$3 \neq 6$ $3 < 6$

$4 \neq 3$ $4 > 3$

$5 \neq 4$ $5 > 4$

$1 \neq 2$ $1 < 2$

$8 = 8$ _____

$8 > 7$ _____

$7 > 6$ _____

$5 \neq 6$ $5 < 6$

$9 > 7$ _____

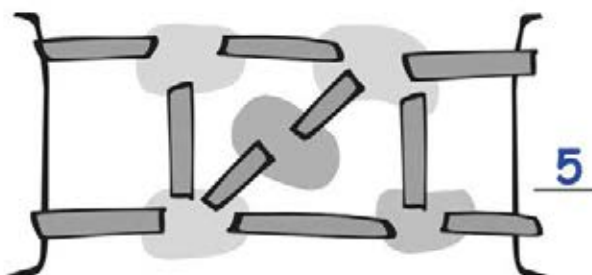
$0 \neq 6$ $0 < 6$

$5 \neq 3$ $5 > 3$

$6 > 5$ _____

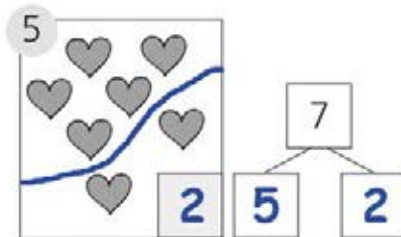
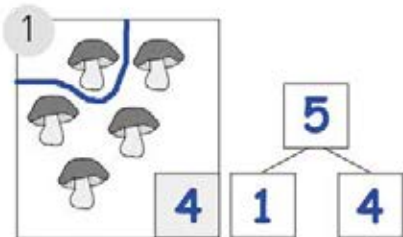
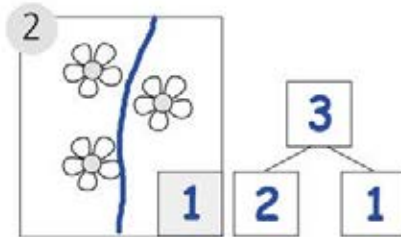
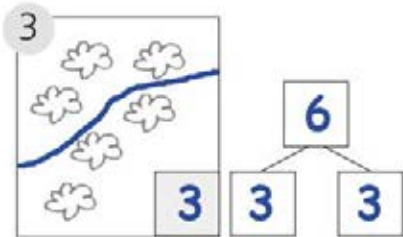
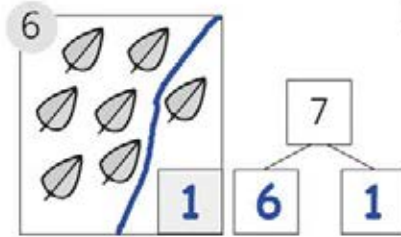
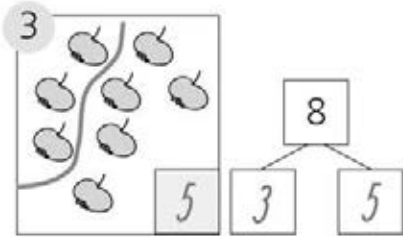
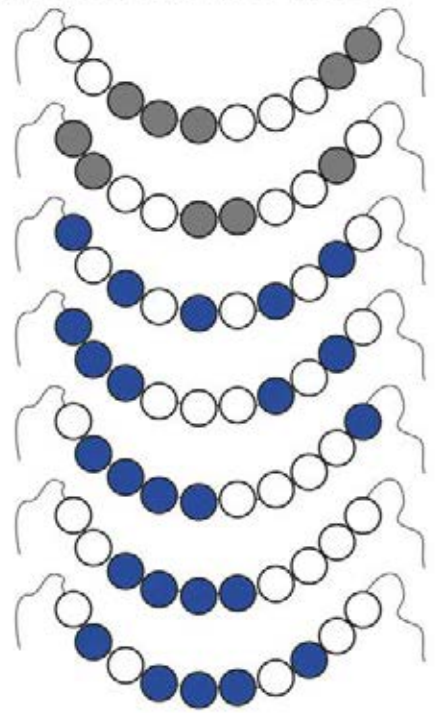
$7 \neq 8$ $4 < 6$

$4 = 6$ _____

PŘEJDI 4 MOSTY.
KOLIK NAJDEŠ CEST?

Copyright: © Nakladatelství Fraus, Plzeň 2007

ROZDĚL A PŘEPÍŠ

VYBARVI 5
NAJDEŠ DALŠÍ MOŽNOSTI?

Copyright: © Nakladatelství Fraus, Pízeň 2007

PŘIDEJ 3 A SČÍTEJ

$$2 + 3 = 5$$

$$1 + 3 = 4$$

$$3 + 3 = 6$$

$$4 + 3 = 7$$

$$0 + 3 = 3$$

$$5 + 3 = 8$$

UBER 3 A ODCÍTEJ

$$8 - 3 = 5$$

$$6 - 3 = 3$$

$$3 - 3 = 0$$

$$4 - 3 = 1$$

$$7 - 3 = 4$$

$$5 - 3 = 2$$

POKRAČUJ



Copyright: © Nakladatelství Fraus, Pízeň 2007

81

ŠKRTNI, NEBO DOPLŇ



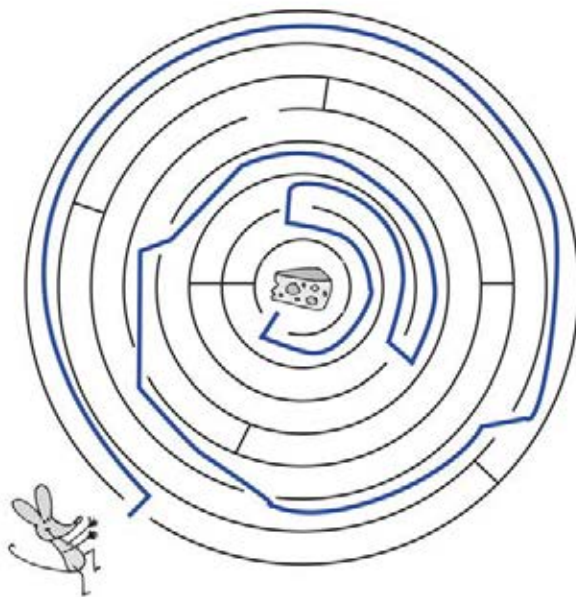
ROZDĚL A DOPLŇ

<p>4</p> <p>4</p>	<p>8</p> <p>4 4</p>	<p>5</p> <p>4 1</p>	<p>8</p> <p>4 4</p>	<p>10</p> <p>4 6</p>
<p>3</p> <p>4</p>	<p>7</p> <p>3 4</p>	<p>9</p> <p>6 3</p>	<p>8</p> <p>2 6</p>	<p>7</p> <p>4 3</p>
		<p>9</p> <p>5 4</p>	<p>6</p> <p>2 4</p>	<p>10</p> <p>5 5</p>

Copyright: © Nakladatelství Fraus, Plzeň 2007

82

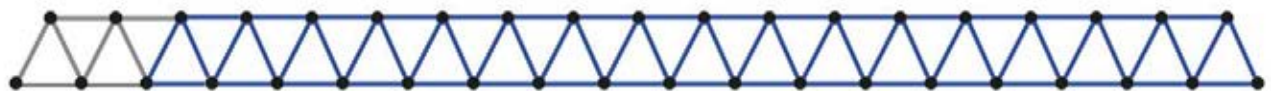
NAJDE MYŠKA CESTU?



ROZDĚL

<p>9</p> <p>5 4</p>	<p>6</p> <p>4 2</p>
<p>7</p> <p>5 2</p>	<p>9</p> <p>3 6</p>
<p>8</p> <p>5 3</p>	<p>5</p> <p>2 3</p>

POKRAČUJ



Copyright: © Nakladatelství Fraus, Plzeň 2007

VYŘEŠ A PŘEPIŠ

3	-	1	=	2	3	←	2	6	-		=	5	6	←	5
4	-	2	=	2	4	←←	2	4	-		=	2	4	←←	2
6	-	2	=	4	6	←←	4	5	-		=	3	5	←←	3
4	-	1	=	3	4	←	3	6	-	3	=	3	6	←←	3
3	-	3	=	0	3	←←←	0	6	-		=	6	6		6
5	-	2	=	3	5	←←	3	5	-		=	4	5	←	4
6	-	1	=	5	6	←	5	6	-		=	4	6	←←	4

SPOJ K SOBĚ

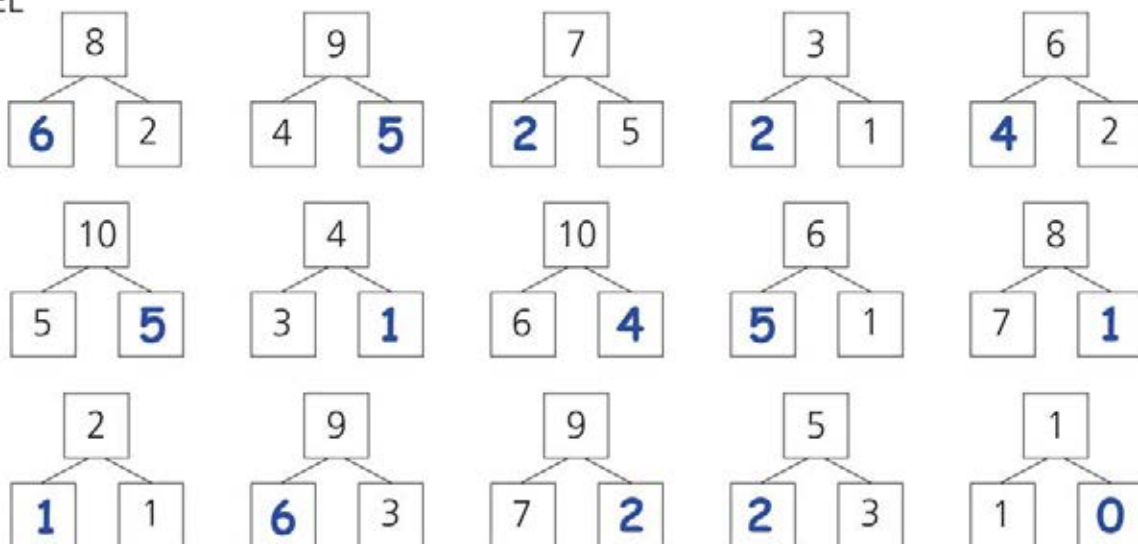
Copyright: © Nakladatelství Fraus, Plzeň 2007

USPOŘÁDEJ

Copyright: © Nakladatelství Fraus, Plzeň 2007

85

ROZDĚL



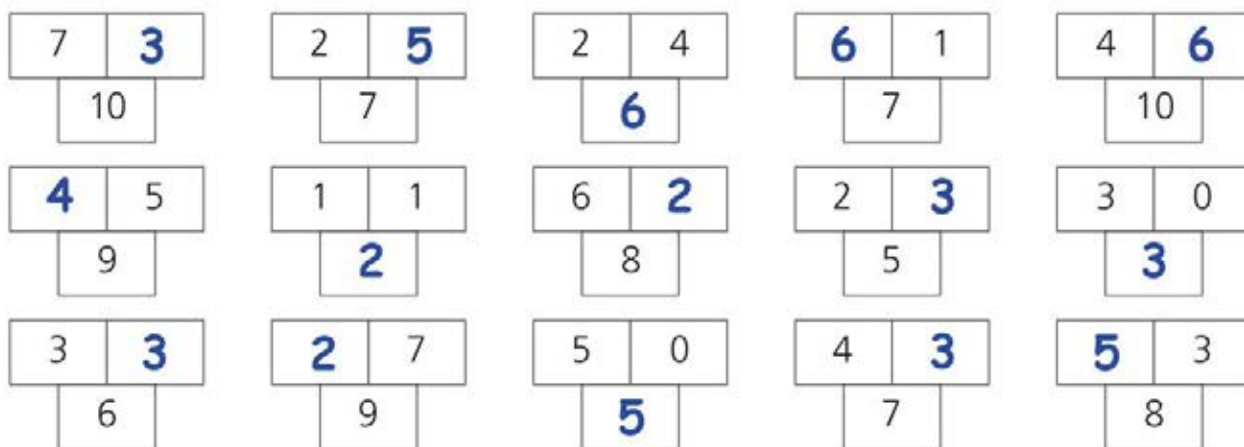
KOLIK PUNTÍKŮ JE POD KAŇKAMI?



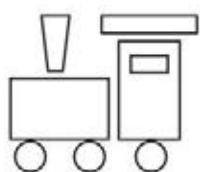
Copyright: © Nakladatelství Fraus, Pízeň 2007

86

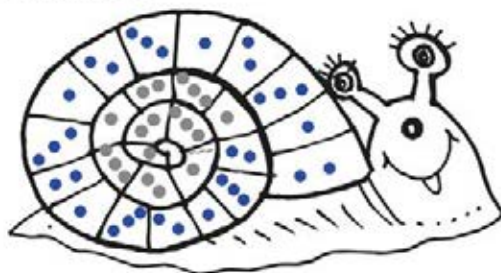
DOPLŇ ČÍSLA



NAKRESLI

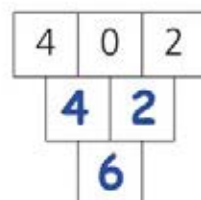
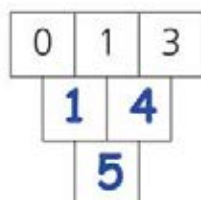
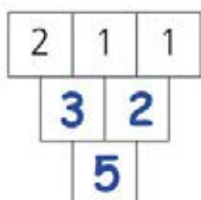
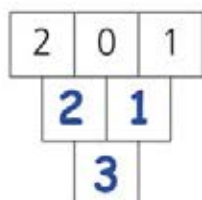
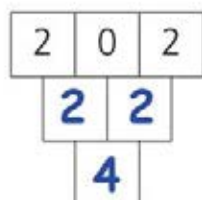
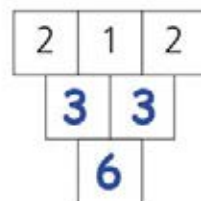
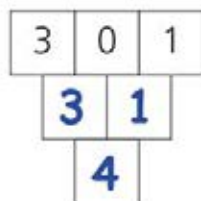
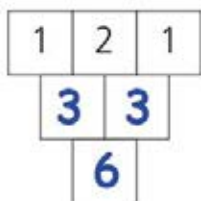
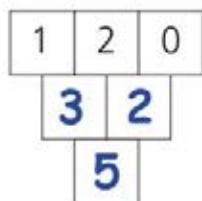
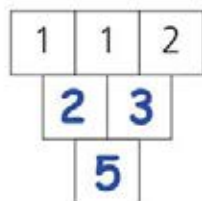


POKRAČUJ

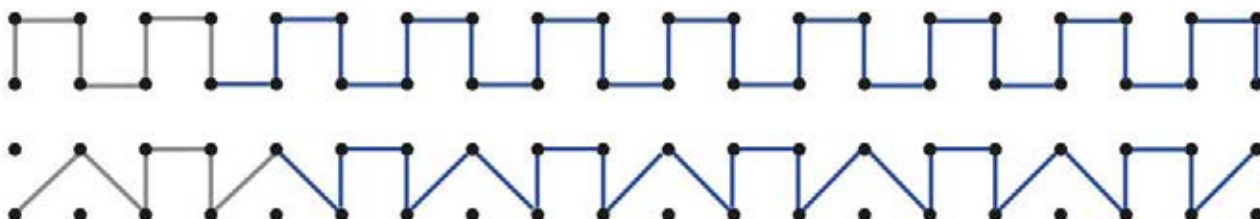


Copyright: © Nakladatelství Fraus, Pízeň 2007

DOPLŇ ČÍSLA

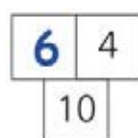


POKRAČUJ



Copyright: © Nakladatelství Fraus, Plzeň 2007

POČÍTEJ



$$6 - 4 = 2$$

$$3 + 1 = 4$$

$$0 + 6 = 6$$

$$9 - 4 = 5$$

$$5 + 1 = 6$$

$$9 - 3 = 6$$

88

$$2 + 3 = 5$$

$$10 - 6 = 4$$

$$5 - 1 = 4$$

$$2 - 2 = 0$$

$$3 + 3 = 6$$

$$9 - 4 = 5$$

$$10 - 4 = 6$$

$$1 + 3 = 4$$

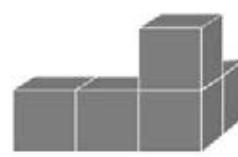
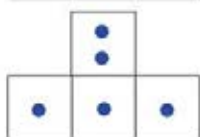


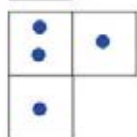
$$4 - 0 = 4$$

$$7 - 3 = 4$$

$$2 + 4 = 6$$

$$4 - 0 = 4$$

ZAPIŠ PLÁN STAVBY



Copyright: © Nakladatelství Fraus, Plzeň 2007

89

7	7										
7											
7											

DOPLŇ ČÍSLA

4 0 1	2 0 3	2 2 1	1 1 4	4 0 3
4 1	2 3	4 3	2 5	4 3
5	5	7	5	7
	3 4	2 5	5 3	4 6
	7	7	8	10

ZAPIŠ POČET
LÍSTKŮ



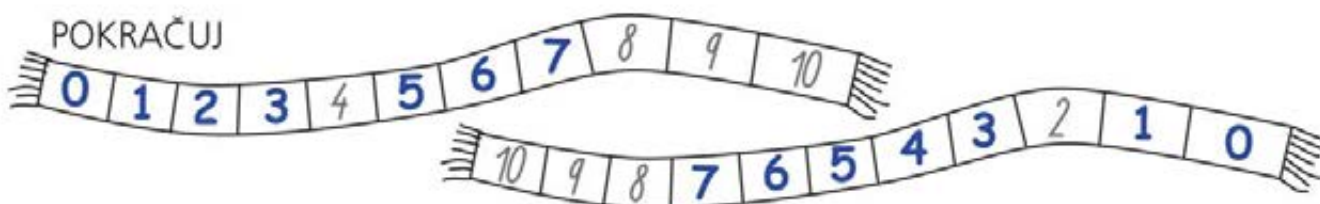
Copyright: © Nakladatelství Fraus, Pízeň 2007

90

VYŘEŠ A PŘEPIŠ

7 - 1 = 6	7 ← 6	6 + 1 = 7	6 → 7
3 + 2 = 5	3 →→ 5	5 - 3 = 2	5 ←←← 2
7 - 3 = 4	7 ←←← 4	4 + 2 = 6	4 →→ 6
7 - 2 = 5	7 ←← 5	5 - 2 = 3	5 ←← 3
4 + 3 = 7	4 →→→ 7	4 + 3 = 7	4 →→→ 7
3 + 2 = 5	3 →→ 5	4 + 1 = 5	4 → 5
6 - 1 = 5	6 ← 5	6 - 2 = 4	6 ←← 4

POKRAČUJ



Copyright: © Nakladatelství Fraus, Pízeň 2007

UYPOČÍTEJ

3	+	4	=	7
8	-	1	=	7
0	+	2	=	2
9	-	5	=	4
5	+	2	=	7
8	-	3	=	5

10	-	3	=	7
9	-	6	=	3
6	+	0	=	6
10	-	5	=	5
3	+	4	=	7
3	+	5	=	8

5	+	3	=	8
8	-	3	=	5
5	-	0	=	5
9	-	5	=	4
1	+	4	=	5
10	-	6	=	4

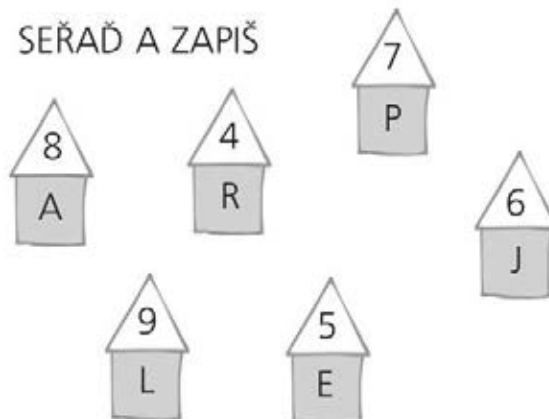
POČÍTEJ A VYBARVUJ



- 5 – HNĚDÁ
- 6 – ŠEDÁ
- 7 – ČERVENÁ

- 8 – MODRÁ
- 9 – ORANŽOVÁ

SEŘAĎ A ZAPIŠ



4	5	6	7	8	9
R	E	J	P	A	L

93

ZAPIŠ PLÁN STAVBY, NEBO VYTVOŘ STAVBU

ZAPIŠ KOLIK

	podlaží		
	1.	2.	3.
□			
○			
△			
*			

Copyright: © Nakladatelství Fraus, Pízeň 2007

94

ROZDĚL

KOLIK POSKLÁDÁŠ △ Z 9 DŘÍVEK? NAKRESLI



Copyright: © Nakladatelství Fraus, Pízeň 2007