

18

1 Doplně >, <, = .

20 + 10	<input type="text"/>	30 - 2
13 + 14	<input type="text"/>	29 - 6
30 - 8	<input type="text"/>	16 + 12



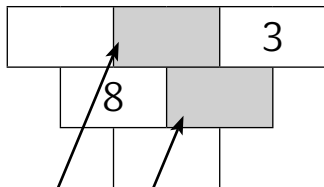
30 - 12	<input type="text"/>	11 + 5
9 + 18	<input type="text"/>	17 + 7
30 - 14	<input type="text"/>	29 - 12



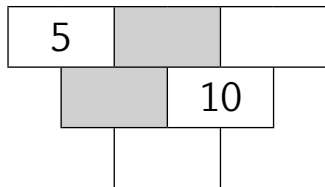
18 + 8	<input type="text"/>	30 - 6
28 - 9	<input type="text"/>	6 + 13
6 + 17	<input type="text"/>	28 - 6



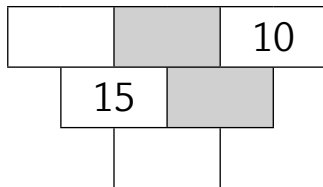
2 Doplně.



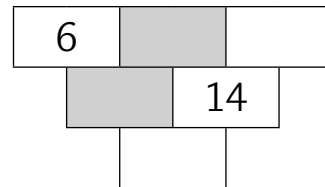
<input type="text"/>	+	<input type="text"/>	=	11
----------------------	---	----------------------	---	----



<input type="text"/>	+	<input type="text"/>	=	15
----------------------	---	----------------------	---	----



<input type="text"/>	+	<input type="text"/>	=	20
----------------------	---	----------------------	---	----



<input type="text"/>	+	<input type="text"/>	=	18
----------------------	---	----------------------	---	----

3 Vybarvi čtvrtinu.

