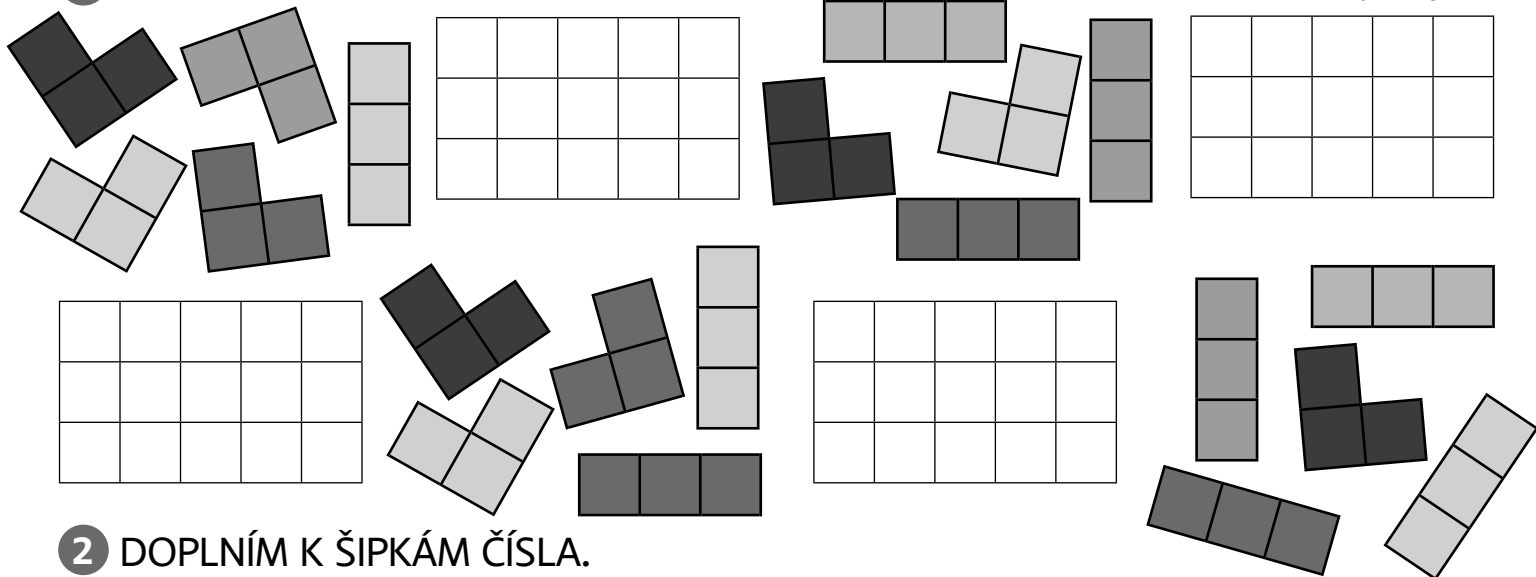
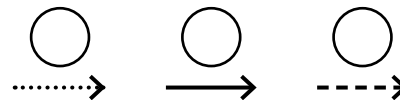
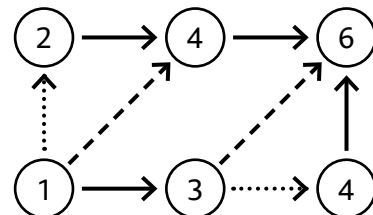
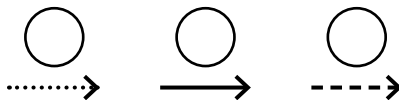
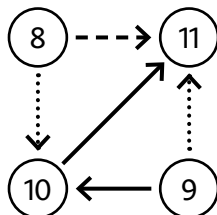
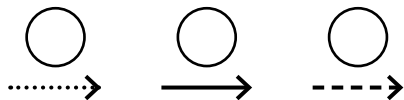
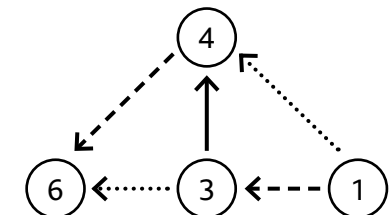


1 POKRYJI PODLAHU PARKETAMI.

JMÉNO _____



2 DOPLNÍM K ŠIPKÁM ČÍSLA.

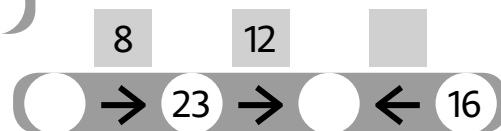
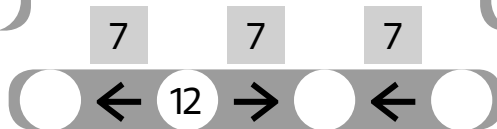
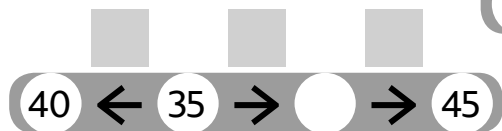
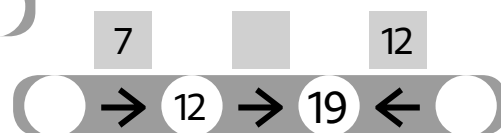
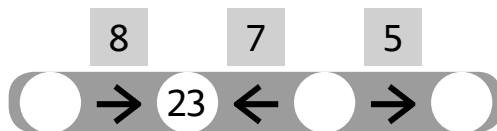
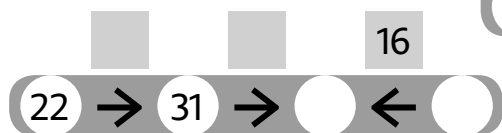


- 1** KOLIK MALÝCH ČTVEREČKŮ
JE VE ČTYŘÚHELNÍKU?
KOLIK JE ZDE OBDÉLNÍKŮ 2×1 ?
DOPLNÍM TABULKU.

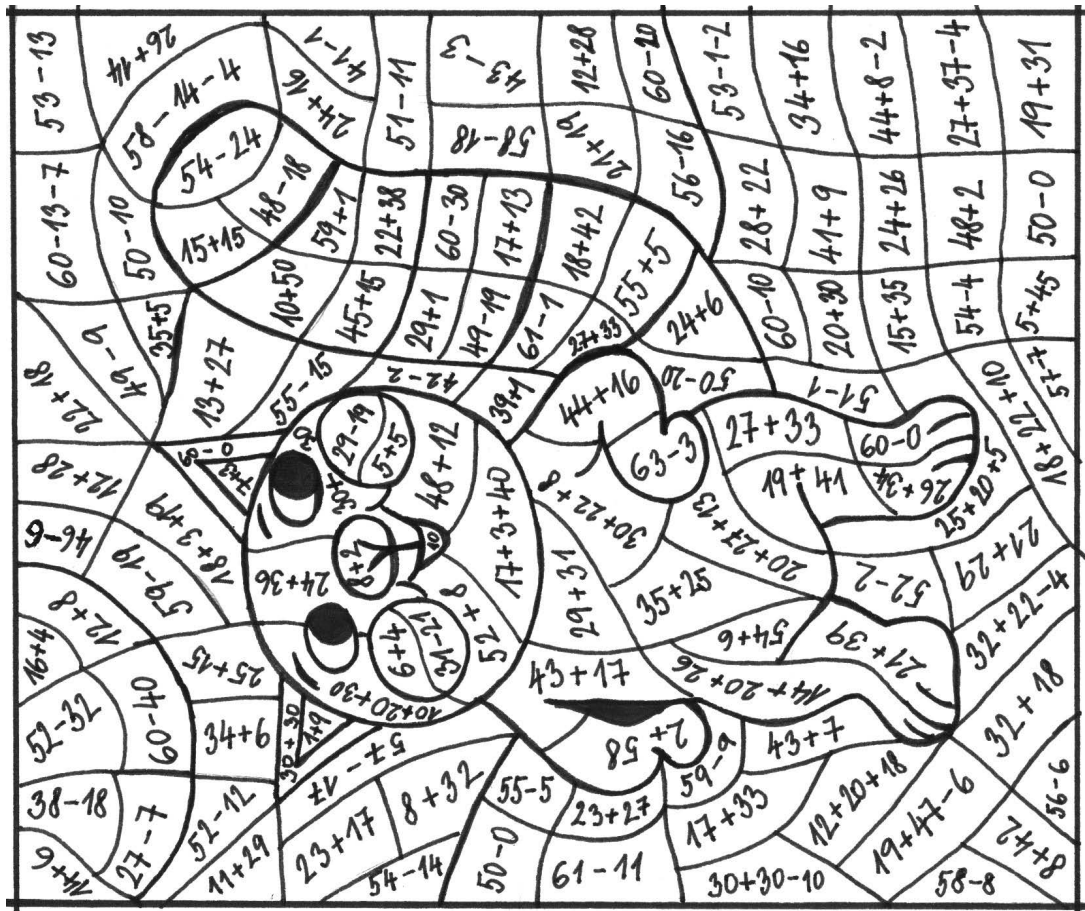
	A	B	C	D
čtverce	3			
obdélníky	2			



- 2** VYŘEŠÍM HADY.



1 POČÍTÁM A VYBARVUJI.



10 – růžová,
 20 – žlutá,
 30 – bílá,

40 – modrá,
 50 – zelená,
 60 – světle hnědá.

1 DOPLNÍM ZNAMÉNKA +, -, •.

2	<input type="text"/>	6	=	12
57	<input type="text"/>	25	=	32
48	<input type="text"/>	37	=	85
3	<input type="text"/>	3	=	9
73	<input type="text"/>	65	=	8
43	<input type="text"/>	37	=	80
6	<input type="text"/>	7	=	42

9	<input type="text"/>	8	=	72
64	=	92	<input type="text"/>	28
48	=	6	<input type="text"/>	8
37	<input type="text"/>	37	=	74
60	<input type="text"/>	40	=	100
56	=	8	<input type="text"/>	7
60	<input type="text"/>	40	=	20

10	<input type="text"/>	10	<input type="text"/>	10	=	90
9	<input type="text"/>	9	<input type="text"/>	19	=	100
3	<input type="text"/>	4	=	6	<input type="text"/>	6
100	<input type="text"/>	44	=	7	<input type="text"/>	8
100	<input type="text"/>	50	<input type="text"/>	25	=	75
100	=	7	<input type="text"/>	7	<input type="text"/>	51
5	<input type="text"/>	6	=	15	<input type="text"/>	15

2 VYŘEŠÍM S POMOCÍ DVOU ŠIPEK. HLEDÁM RŮZNÉ MOŽNOSTI.



→ →	<input type="text"/>	=	<input type="text"/>	<input type="text"/>
-----	----------------------	---	----------------------	----------------------

→ →	<input type="text"/>	=	<input type="text"/>	<input type="text"/>
-----	----------------------	---	----------------------	----------------------

→ →	<input type="text"/>	=	<input type="text"/>	<input type="text"/>
-----	----------------------	---	----------------------	----------------------

3 VYŘEŠÍM SOUČTOVÉ TROJÚHELNÍKY.

